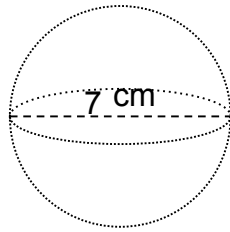




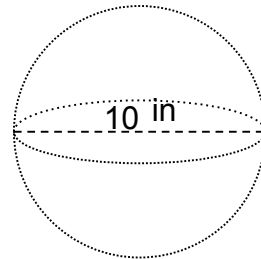
Name: _____

Calculate the Volume

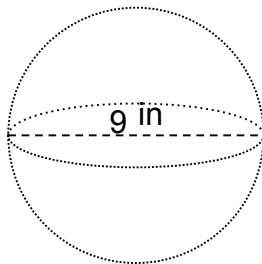
1.



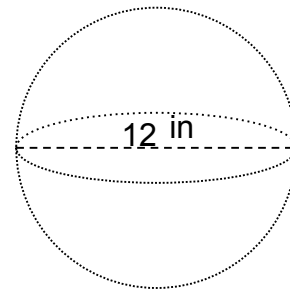
2.



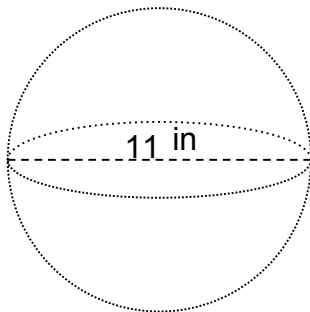
3.



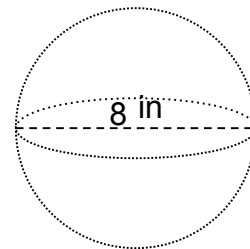
4.



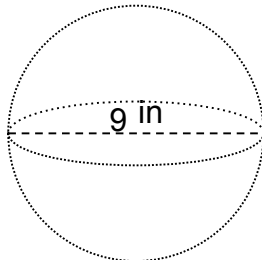
5.



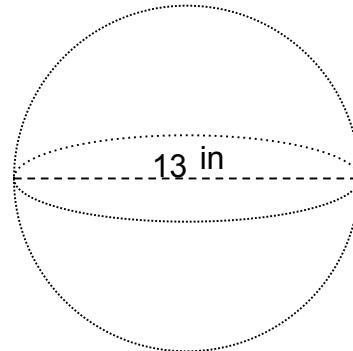
6.



7.



8.

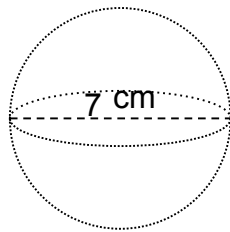




Name: _____

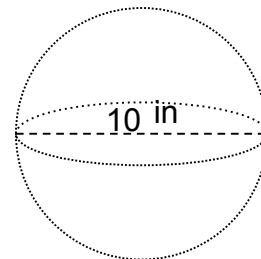
Calculate the Volume

1.



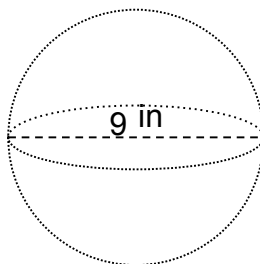
$$V = 180 \text{ cm}^3$$

2.



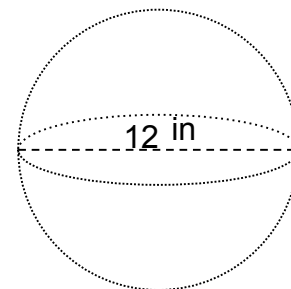
$$V = 524 \text{ in}^3$$

3.



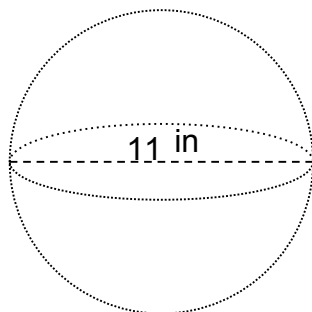
$$V = 382 \text{ in}^3$$

4.



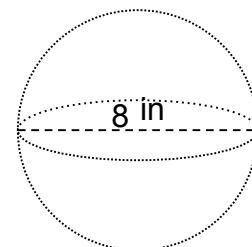
$$V = 905 \text{ in}^3$$

5.



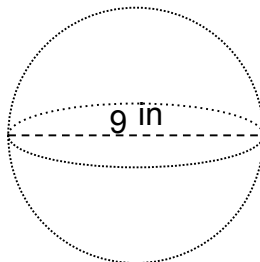
$$V = 697 \text{ in}^3$$

6.



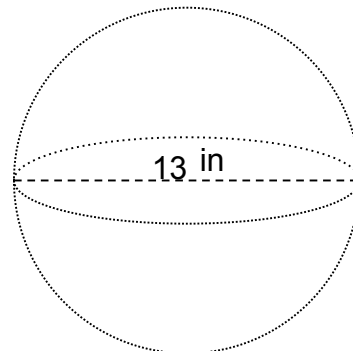
$$V = 268 \text{ in}^3$$

7.



$$V = 382 \text{ in}^3$$

8.



$$V = 1,150 \text{ in}^3$$