


Name: _____

Time Passages: To the Quarter Hour


Draw the clock hands to show the passage of time.

1.




What time will it be in 6 hours 15 minutes?

2.



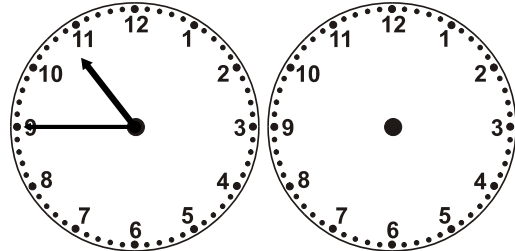
What time will it be in 5 hours 45 minutes?

3.




What time will it be in 8 hours 0 minutes?

4.




What time will it be in 3 hours 0 minutes?

5.




What time will it be in 1 hour 15 minutes?

6.




What time will it be in 1 hour 15 minutes?

7.



What time will it be in 8 hours 15 minutes?

8.



What time will it be in 7 hours 30 minutes?