

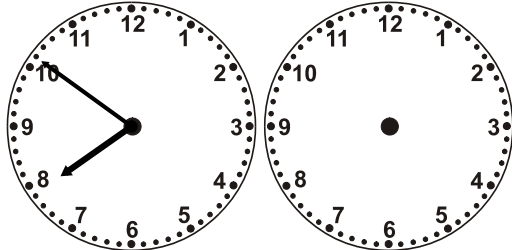


Name: _____

Time Passages: To the Minute Worksheet 6

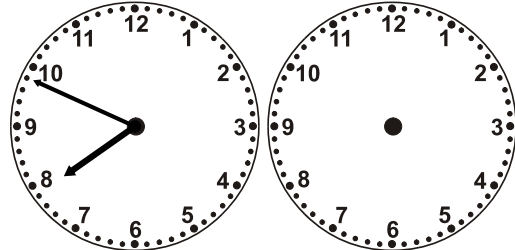
Draw the clock hands to show the passage of time.

1.



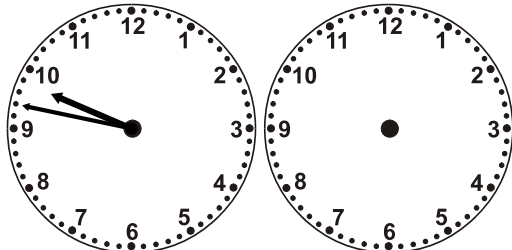
What time will it be in 8 hours 22 minutes?

2.




What time will it be in 7 hours 3 minutes?

3.



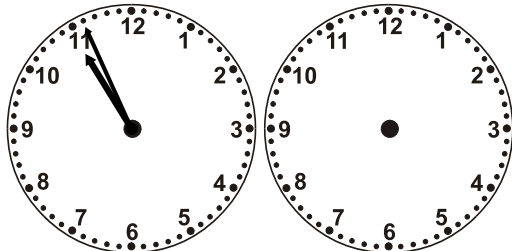
What time will it be in 3 hours 19 minutes?

4.



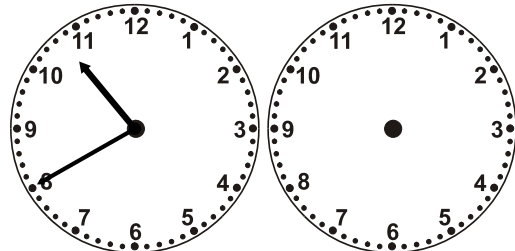
What time will it be in 4 hours 28 minutes?

5.




What time will it be in 7 hours 51 minutes?

6.




What time will it be in 6 hours 34 minutes?

7.




What time will it be in 3 hours 42 minutes?

8.



What time will it be in 4 hours 59 minutes?

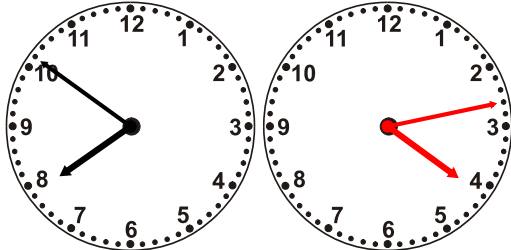


Name: _____

Time Passages: To the Minute Worksheet 6

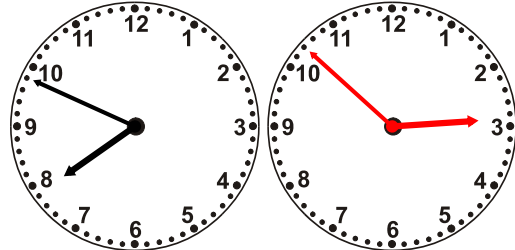
Draw the clock hands to show the passage of time.

1.



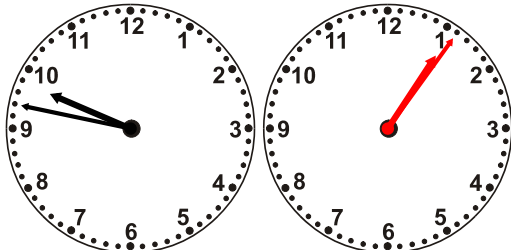
What time will it be in 8 hours 22 minutes?

2.



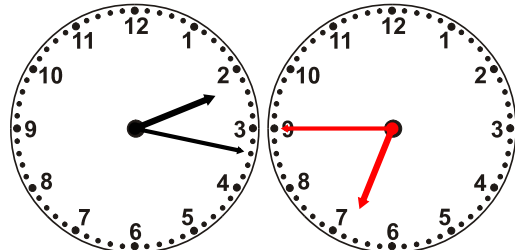
What time will it be in 7 hours 3 minutes?

3.



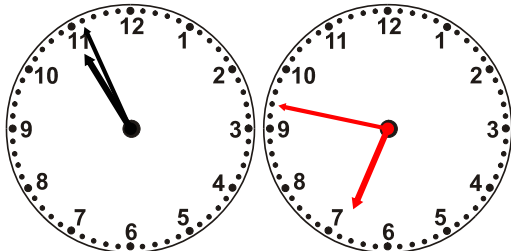
What time will it be in 3 hours 19 minutes?

4.



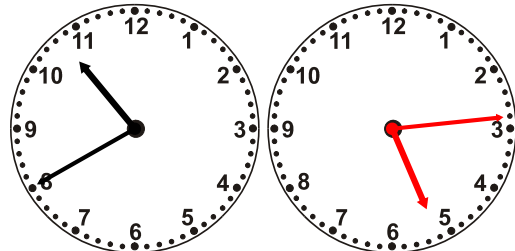
What time will it be in 4 hours 28 minutes?

5.



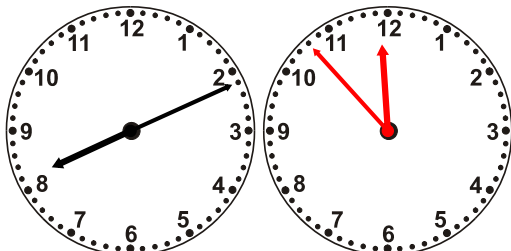
What time will it be in 7 hours 51 minutes?

6.




What time will it be in 6 hours 34 minutes?

7.



What time will it be in 3 hours 42 minutes?

8.



What time will it be in 4 hours 59 minutes?