


Name: _____

Time Passages: To the Minute Worksheet 4


Draw the clock hands to show the passage of time.

1.




What time will it be in 3 hours 54 minutes?

2.



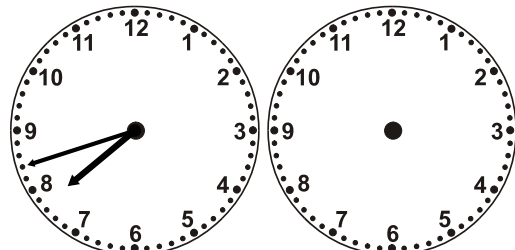
What time will it be in 2 hours 9 minutes?

3.




What time will it be in 7 hours 14 minutes?

4.




What time will it be in 4 hours 24 minutes?

5.




What time will it be in 4 hours 18 minutes?

6.




What time will it be in 7 hours 3 minutes?

7.




What time will it be in 7 hours 33 minutes?

8.



What time will it be in 8 hours 35 minutes?

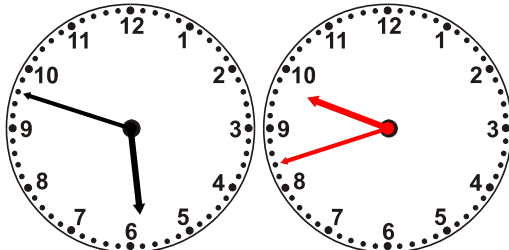


Name: _____

Time Passages: To the Minute Worksheet 4


Draw the clock hands to show the passage of time.

1.




What time will it be in 3 hours 54 minutes?

2.



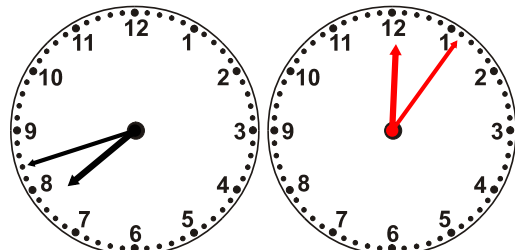
What time will it be in 2 hours 9 minutes?

3.




What time will it be in 7 hours 14 minutes?

4.




What time will it be in 4 hours 24 minutes?

5.




What time will it be in 4 hours 18 minutes?

6.




What time will it be in 7 hours 3 minutes?

7.



What time will it be in 7 hours 33 minutes?

8.



What time will it be in 8 hours 35 minutes?