



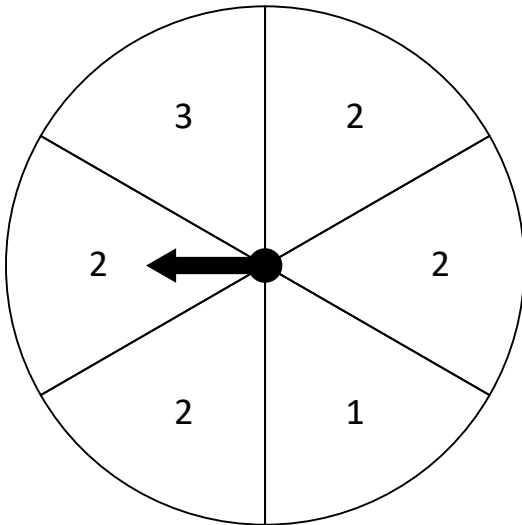
Name: \_\_\_\_\_

# What is the Probability?

Probability is the chance of something happening. For the spinner, it is the chance that the arrow will land on a number.

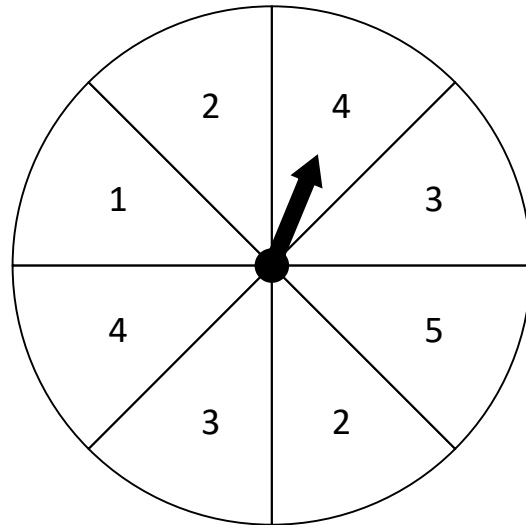
Using a fractional number ( $\frac{2}{5}$   $\frac{3}{6}$ ...), determine the probability of the spinner pointers landing on the requested numbers:

1.



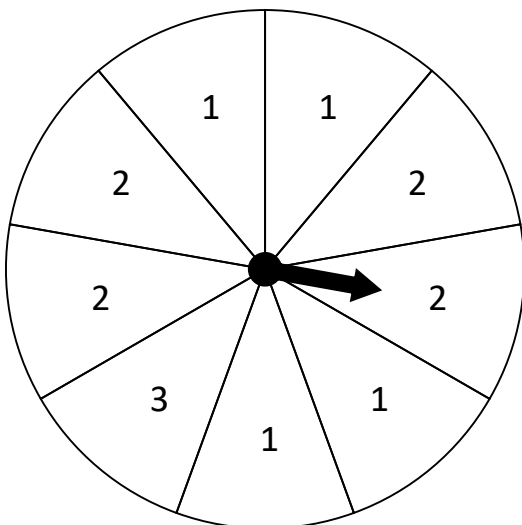
Land on 2 = \_\_\_\_\_  
Land on 3 = \_\_\_\_\_  
Land on even = \_\_\_\_\_

2.



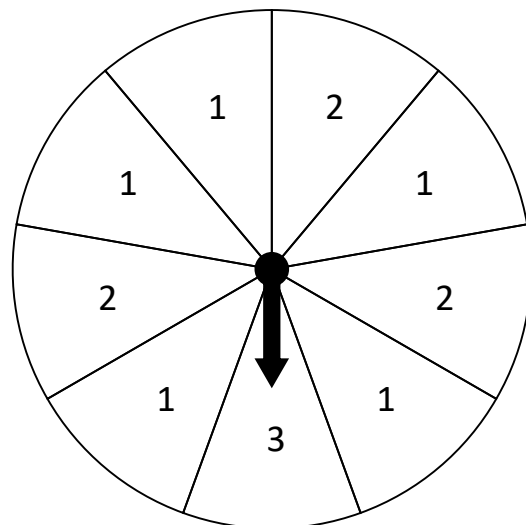
Land on 4 = \_\_\_\_\_  
Land on 5 = \_\_\_\_\_  
Land on odd = \_\_\_\_\_

3.



Land on 2 = \_\_\_\_\_  
Land on 1 = \_\_\_\_\_  
Land on odd = \_\_\_\_\_

4.



Land on 3 = \_\_\_\_\_  
Land on 2 = \_\_\_\_\_  
Land on even = \_\_\_\_\_



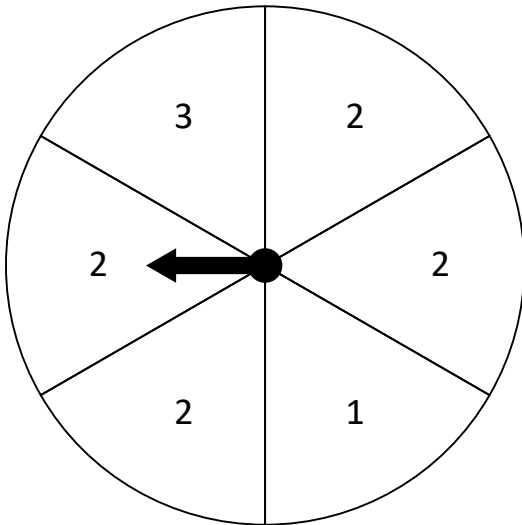
Name: \_\_\_\_\_

# What is the Probability?

Probability is the chance of something happening. For the spinner, it is the chance that the arrow will land on a number.

Using a fractional number ( $\frac{2}{5}$   $\frac{3}{6}$ ...), determine the probability of the spinner pointers landing on the requested numbers:

1.

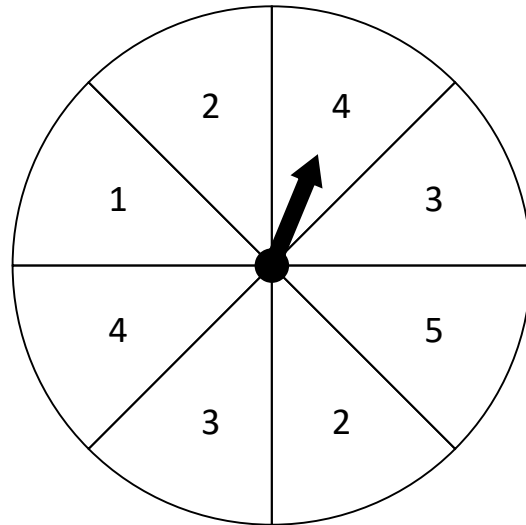


Land on 2 =  $\frac{2}{3}$

Land on 3 =  $\frac{1}{6}$

Land on even =  $\frac{2}{3}$

2.

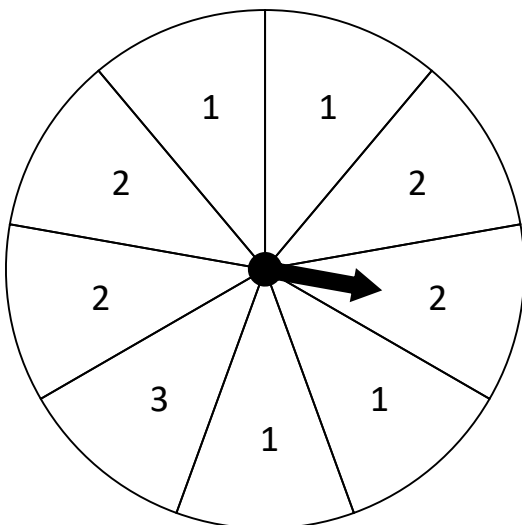


Land on 4 =  $\frac{1}{4}$

Land on 5 =  $\frac{1}{8}$

Land on odd =  $\frac{1}{2}$

3.

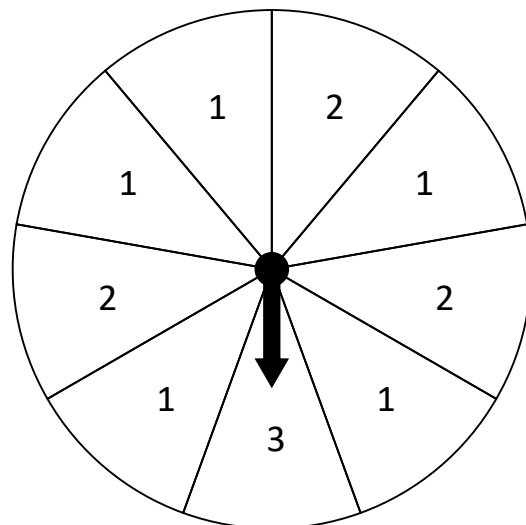


Land on 2 =  $\frac{4}{9}$

Land on 1 =  $\frac{4}{9}$

Land on odd =  $\frac{5}{9}$

4.



Land on 3 =  $\frac{1}{9}$

Land on 2 =  $\frac{1}{3}$

Land on even =  $\frac{1}{3}$