



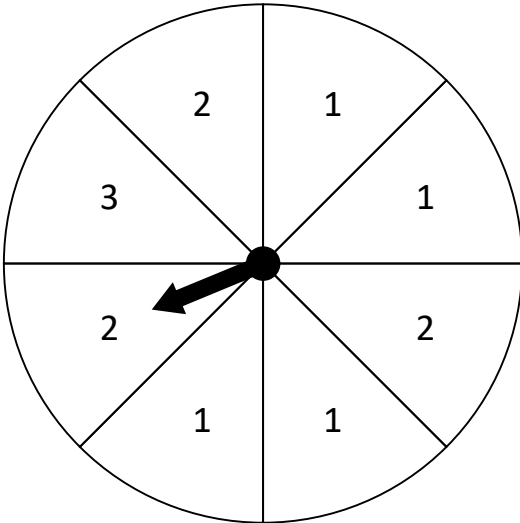
Name: _____

What is the Probability?

Probability is the chance of something happening. For the spinner, it is the chance that the arrow will land on a number.

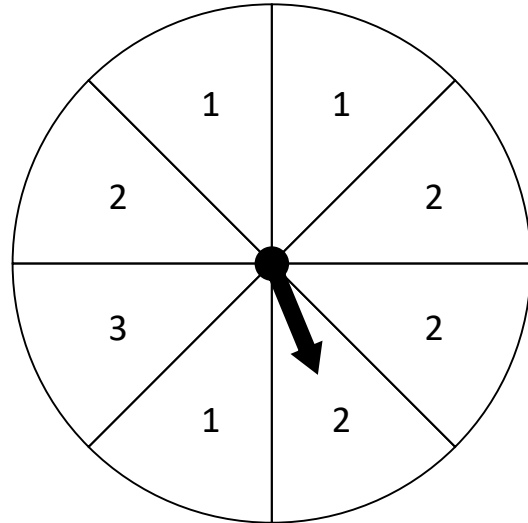
Using a fractional number ($\frac{2}{5}$ $\frac{3}{6}$...), determine the probability of the spinner pointers landing on the requested numbers:

1.



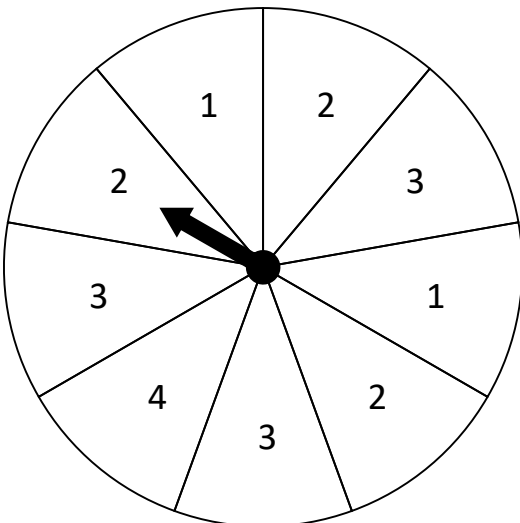
Land on 3 = _____
Land on 1 = _____
Land on odd = _____

2.



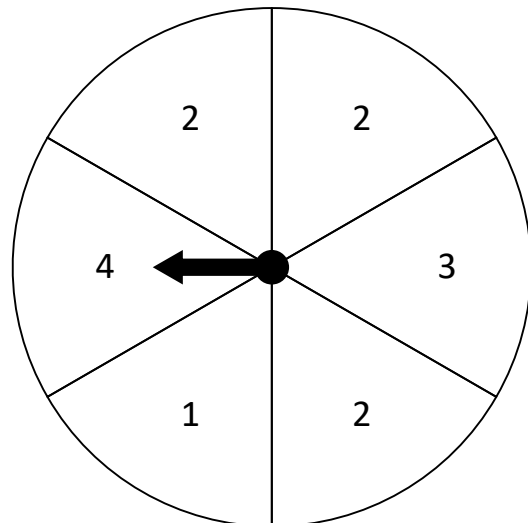
Land on 1 = _____
Land on 2 = _____
Land on odd = _____

3.



Land on 3 = _____
Land on 2 = _____
Land on odd = _____

4.



Land on 3 = _____
Land on 4 = _____
Land on odd = _____



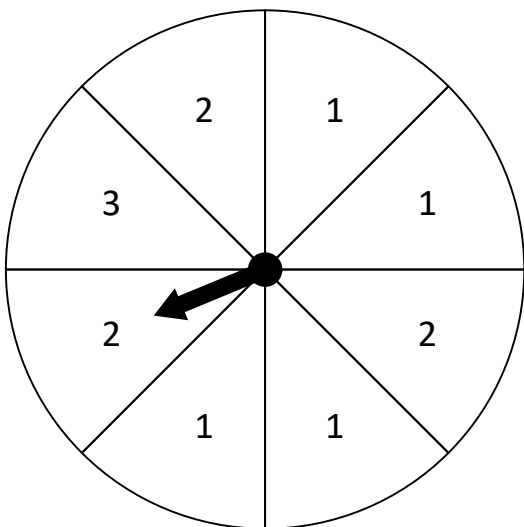
Name: _____

What is the Probability?

Probability is the chance of something happening. For the spinner, it is the chance that the arrow will land on a number.

Using a fractional number ($\frac{2}{5}$ $\frac{3}{6}$...), determine the probability of the spinner pointers landing on the requested numbers:

1.

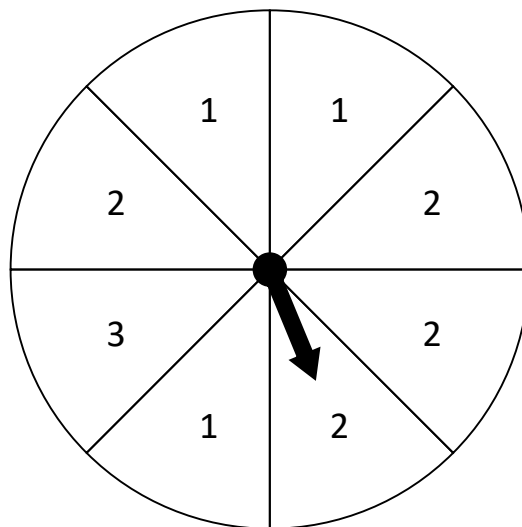


Land on 3 = $\frac{1}{8}$

Land on 1 = $\frac{1}{2}$

Land on odd = $\frac{5}{8}$

2.

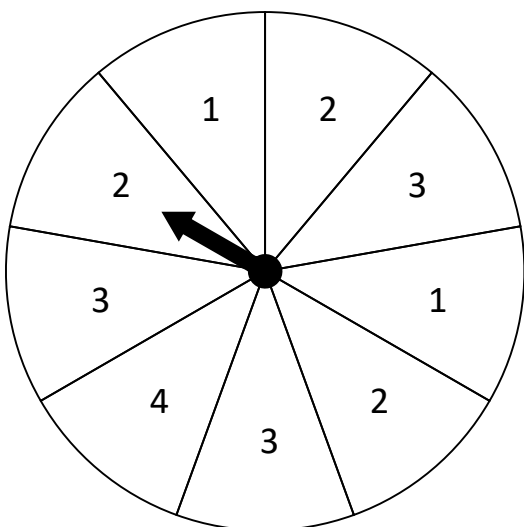


Land on 1 = $\frac{3}{8}$

Land on 2 = $\frac{1}{2}$

Land on odd = $\frac{1}{2}$

3.

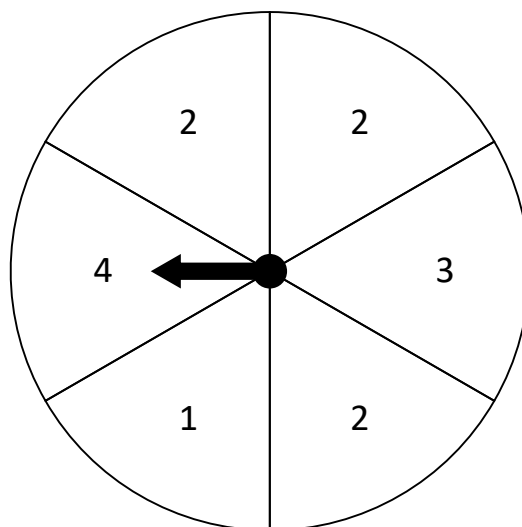


Land on 3 = $\frac{1}{3}$

Land on 2 = $\frac{1}{3}$

Land on odd = $\frac{5}{9}$

4.



Land on 3 = $\frac{1}{6}$

Land on 4 = $\frac{1}{6}$

Land on odd = $\frac{1}{3}$