


Name: _____

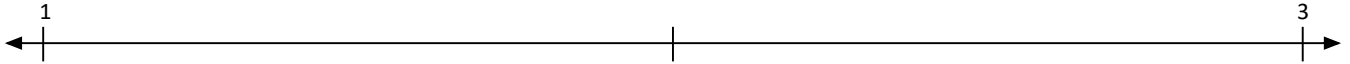


Plotting Decimals

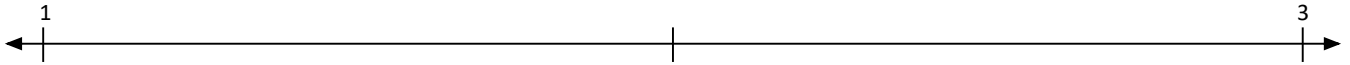
Look carefully at the numberline and determine where each number should be placed:

Identify where each set of points should be placed on the number lines below.

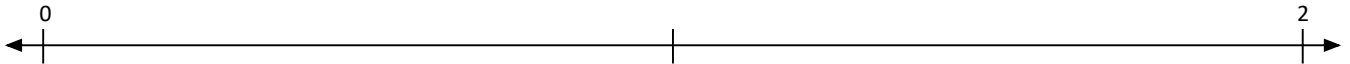
1. 2 2.8 2.3 1.7



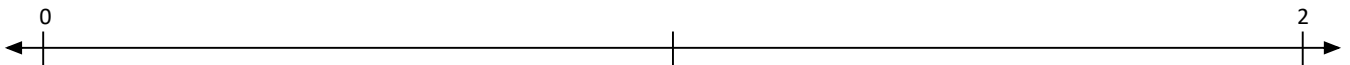
2. 2 1.4 2.9 1.8



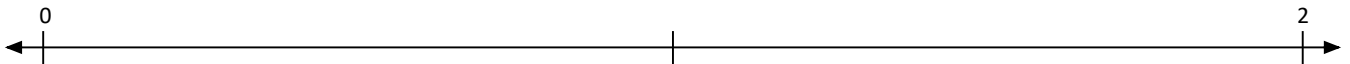
3. 1.2 0.5 1.8 1.4




4. 1.6 1 0.2 0.6



5. 1.7 0.4 1 1.3



Name: _____

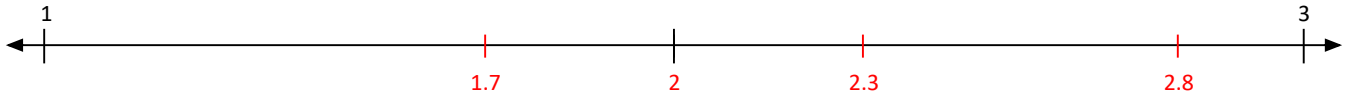


Plotting Decimals

Look carefully at the numberline and determine where each number should be placed:

Identify where each set of points should be placed on the number lines below.

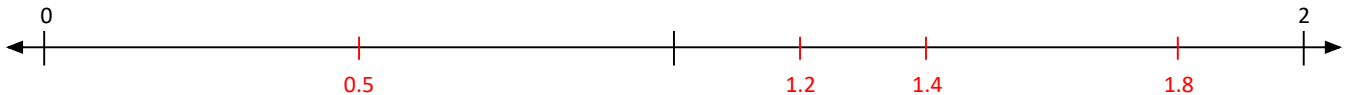
1. 2 2.8 2.3 1.7



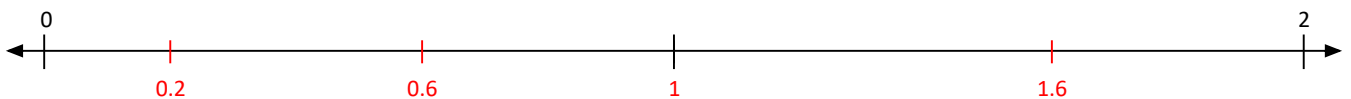
2. 2 1.4 2.9 1.8



3. 1.2 0.5 1.8 1.4



4. 1.6 1 0.2 0.6



5. 1.7 0.4 1 1.3

