

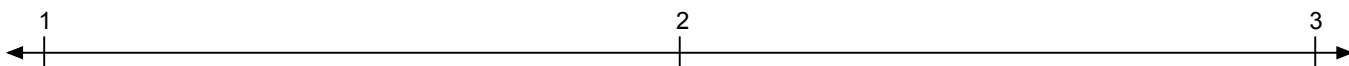


Name: \_\_\_\_\_

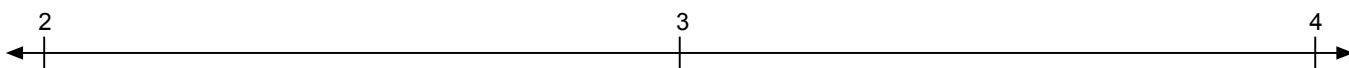
# Place The Fractions

Place the four fractions on the line below.

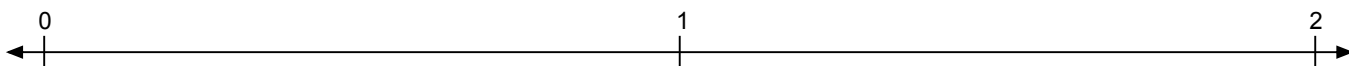
1.  $1\frac{1}{3}$     $2\frac{1}{3}$     $2\frac{2}{3}$     $1\frac{2}{3}$



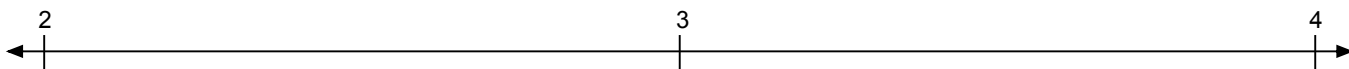
2.  $2\frac{1}{4}$     $3\frac{3}{4}$     $3\frac{1}{4}$     $2\frac{3}{4}$



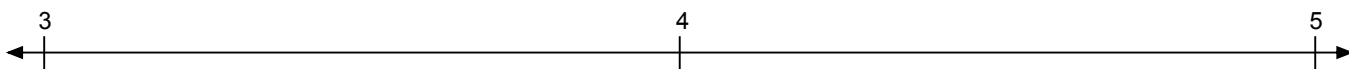
3.  $1\frac{3}{4}$     $\frac{1}{2}$     $1\frac{1}{4}$     $1\frac{1}{2}$



4.  $2\frac{1}{3}$     $2\frac{2}{3}$     $3\frac{2}{3}$     $3\frac{1}{3}$



5.  $4\frac{1}{5}$     $3\frac{3}{5}$     $3\frac{1}{5}$     $4\frac{4}{5}$



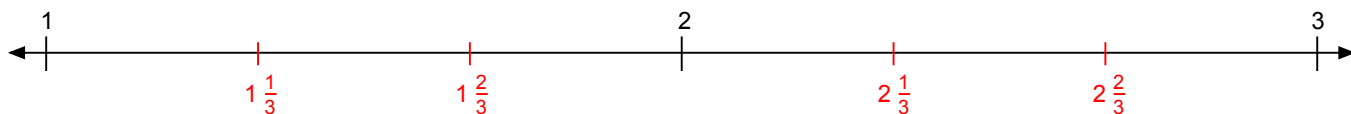


Name: \_\_\_\_\_

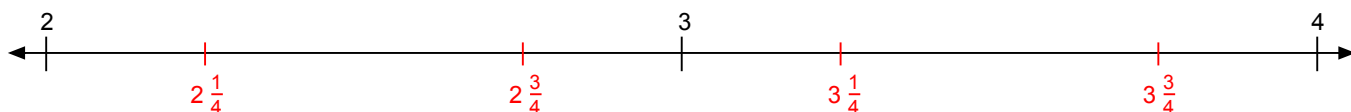
# Place The Fractions

Place the four fractions on the line below.

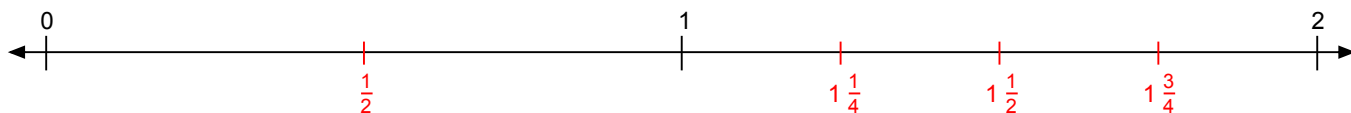
1.  $1\frac{1}{3}$     $2\frac{1}{3}$     $2\frac{2}{3}$     $1\frac{2}{3}$



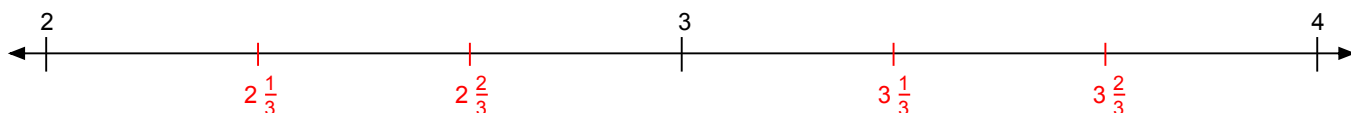
2.  $2\frac{1}{4}$     $3\frac{3}{4}$     $3\frac{1}{4}$     $2\frac{3}{4}$



3.  $1\frac{3}{4}$     $\frac{1}{2}$     $1\frac{1}{4}$     $1\frac{1}{2}$



4.  $2\frac{1}{3}$     $2\frac{2}{3}$     $3\frac{2}{3}$     $3\frac{1}{3}$



5.  $4\frac{1}{5}$     $3\frac{3}{5}$     $3\frac{1}{5}$     $4\frac{4}{5}$

