




Name: _____


Place The Fractions

Place the four fractions on the line below.


1. $2\frac{2}{3}$ $4\frac{2}{3}$ 4 $3\frac{1}{3}$




2. $\frac{2}{3}$ $1\frac{2}{3}$ $\frac{1}{3}$ 2




3. $1\frac{2}{3}$ $3\frac{2}{3}$ 3 $2\frac{1}{3}$



4. $3\frac{1}{3}$ $4\frac{1}{3}$ $3\frac{2}{3}$ $4\frac{2}{3}$



5. 5 $4\frac{1}{3}$ $3\frac{2}{3}$ $5\frac{2}{3}$



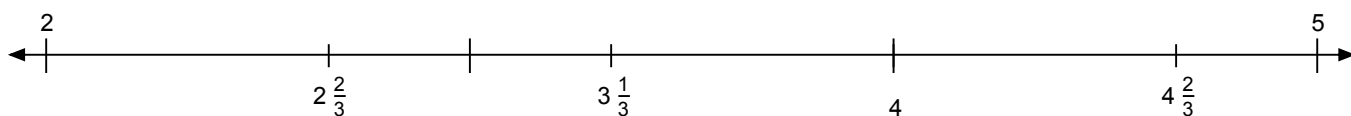


Name: _____

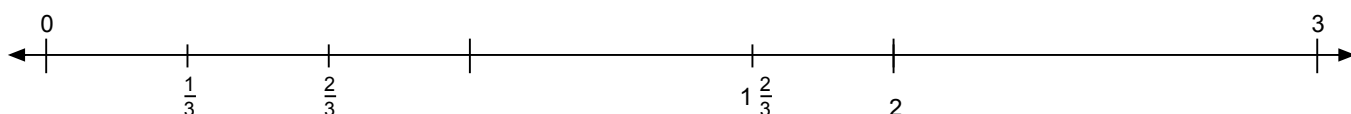
Place The Fractions

Place the four fractions on the line below.

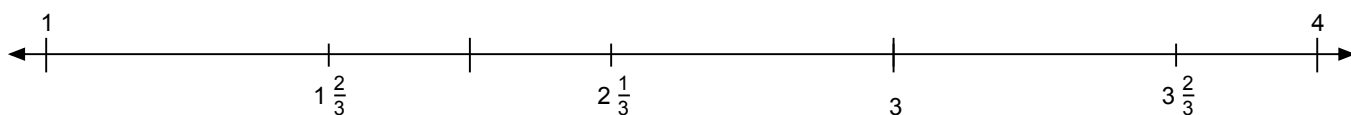
1. $2\frac{2}{3}$ $4\frac{2}{3}$ 4 $3\frac{1}{3}$




2. $\frac{2}{3}$ $1\frac{2}{3}$ $\frac{1}{3}$ 2



3. $1\frac{2}{3}$ $3\frac{2}{3}$ 3 $2\frac{1}{3}$



4. $3\frac{1}{3}$ $4\frac{1}{3}$ $3\frac{2}{3}$ $4\frac{2}{3}$



5. 5 $4\frac{1}{3}$ $3\frac{2}{3}$ $5\frac{2}{3}$

