




Name: _____


Place The Fractions

Place the four fractions on the line below.


1. 5 $6\frac{1}{3}$ $4\frac{1}{3}$ $5\frac{2}{3}$




2. 2 3 $1\frac{1}{3}$ $3\frac{2}{3}$




3. $2\frac{1}{3}$ $3\frac{2}{3}$ $4\frac{1}{3}$ 3



4. $5\frac{1}{3}$ 5 $3\frac{1}{3}$ $3\frac{2}{3}$



5. 4 $4\frac{2}{3}$ $3\frac{2}{3}$ $4\frac{1}{3}$






Name: _____


Place The Fractions

Place the four fractions on the line below.


1. 5 $6\frac{1}{3}$ $4\frac{1}{3}$ $5\frac{2}{3}$




2. 2 3 $1\frac{1}{3}$ $3\frac{2}{3}$



3. $2\frac{1}{3}$ $3\frac{2}{3}$ $4\frac{1}{3}$ 3



4. $5\frac{1}{3}$ 5 $3\frac{1}{3}$ $3\frac{2}{3}$



5. 4 $4\frac{2}{3}$ $3\frac{2}{3}$ $4\frac{1}{3}$

