




Name: _____


Place The Fractions

Place the four fractions on the line below.


1. 5 $6\frac{1}{2}$ $5\frac{1}{2}$ $4\frac{1}{2}$




2. $4\frac{1}{2}$ $6\frac{1}{4}$ $5\frac{1}{2}$ 5




3. $5\frac{3}{4}$ $3\frac{1}{4}$ 5 $4\frac{1}{2}$



4. 1 $2\frac{1}{2}$ $\frac{1}{2}$ 2



5. $6\frac{1}{4}$ $6\frac{3}{4}$ $5\frac{1}{2}$ 5



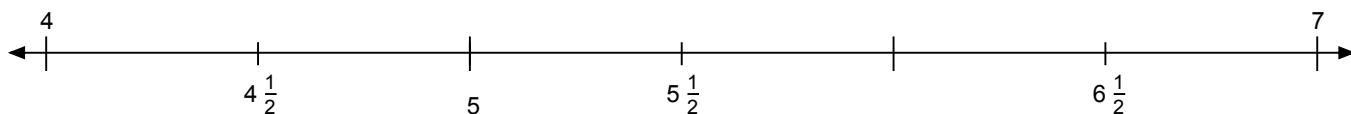


Name: _____

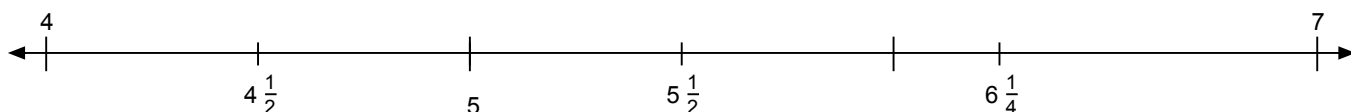
Place The Fractions

Place the four fractions on the line below.

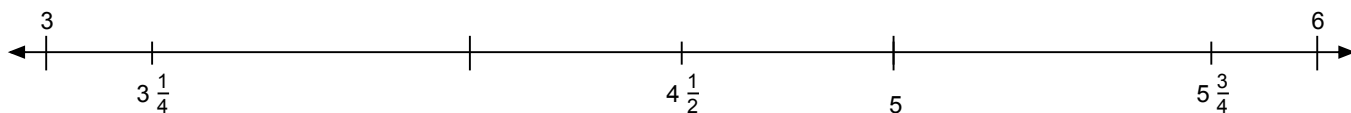
1. 5 $6\frac{1}{2}$ $5\frac{1}{2}$ $4\frac{1}{2}$




2. $4\frac{1}{2}$ $6\frac{1}{4}$ $5\frac{1}{2}$ 5



3. $5\frac{3}{4}$ $3\frac{1}{4}$ 5 $4\frac{1}{2}$



4. 1 $2\frac{1}{2}$ $\frac{1}{2}$ 2



5. $6\frac{1}{4}$ $6\frac{3}{4}$ $5\frac{1}{2}$ 5

