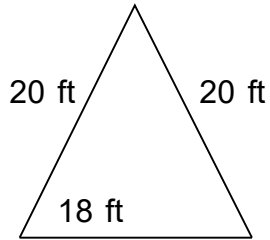


Name: _____

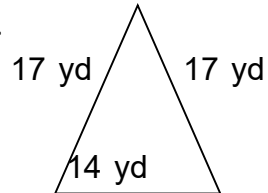
Perimeter of Triangles

Find the perimeter of the triangles. Answer using the correct units.

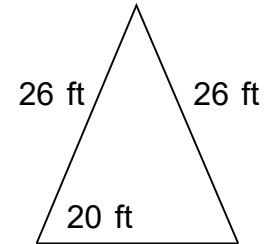
1.



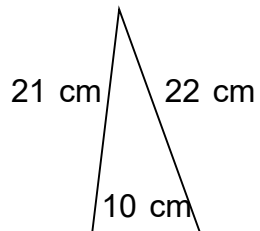
2.



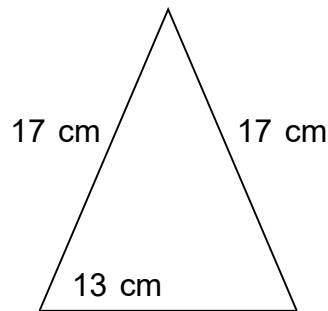
3.



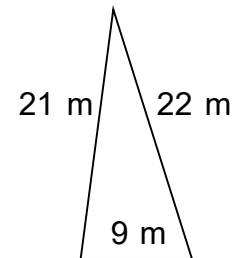
4.



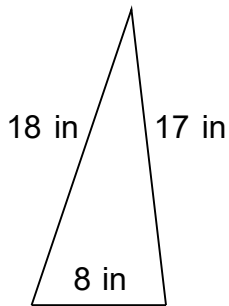
5.



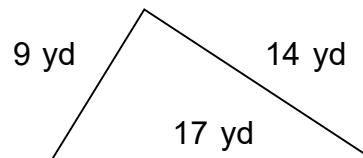
6.



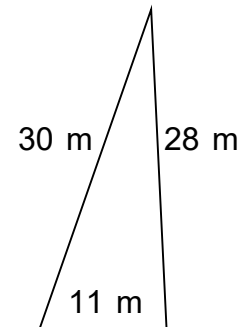
7.



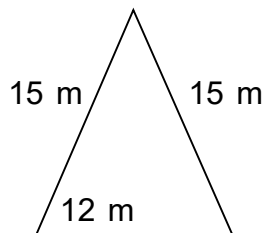
8.




9.



10.



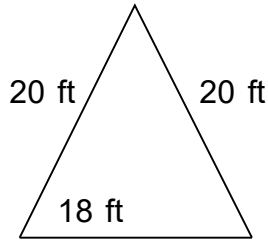


Name: _____

Perimeter of Triangles

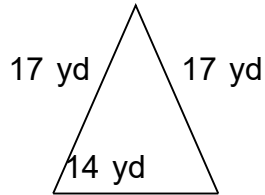
Find the perimeter of the triangles. Answer using the correct units.

1.



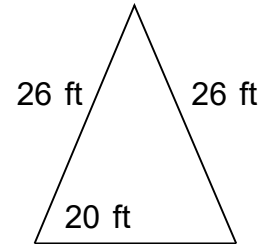
$$A = 160.74 \text{ ft}^2$$

2.



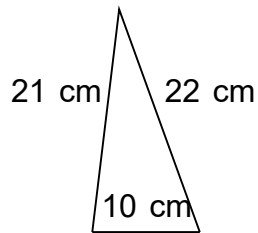
$$A = 108.43 \text{ yd}^2$$

3.



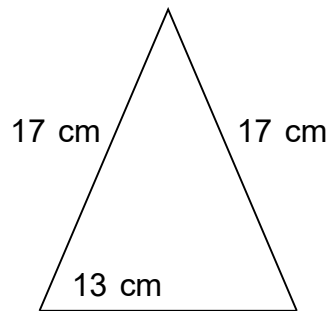
$$A = 240 \text{ ft}^2$$

4.



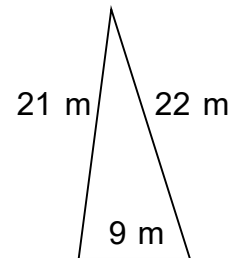
$$A = 104.4 \text{ cm}^2$$

5.



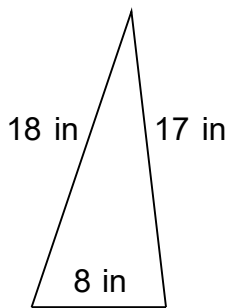
$$A = 102.12 \text{ cm}^2$$

6.



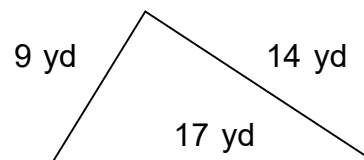
$$A = 93.6 \text{ m}^2$$

7.



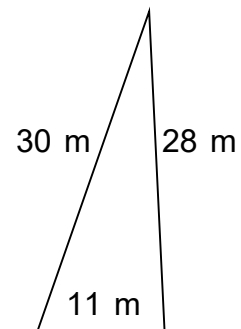
$$A = 67.76 \text{ in}^2$$

8.



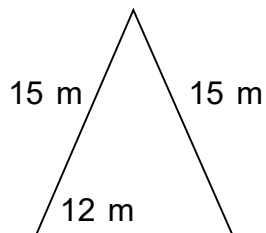
$$A = 66.3 \text{ yd}^2$$

9.



$$A = 155.21 \text{ m}^2$$

10.



$$A = 82.5 \text{ m}^2$$