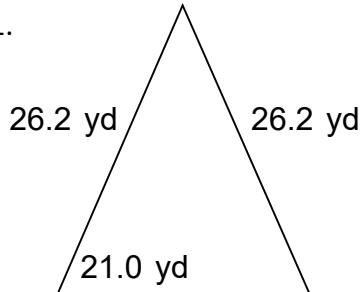


Name: \_\_\_\_\_

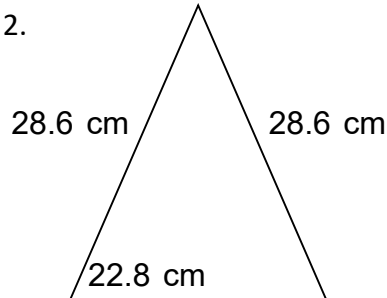
# Perimeter of Triangles

Find the perimeter of the triangles. Answer using the correct units.

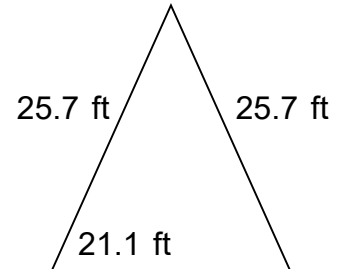
1.



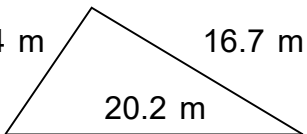
2.



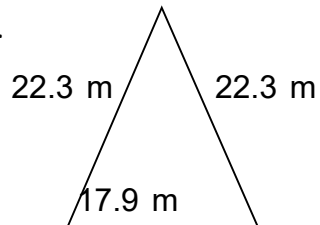
3.



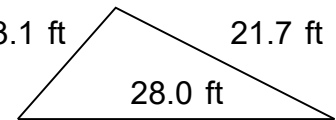
4. 10.4 m



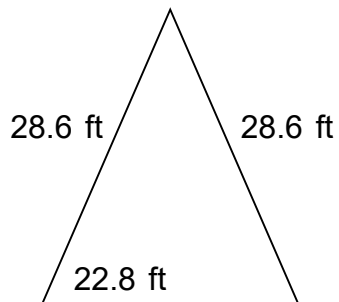
5.



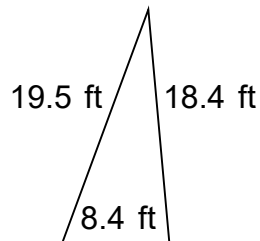
6. 13.1 ft



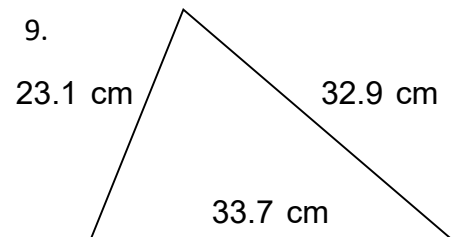
7.



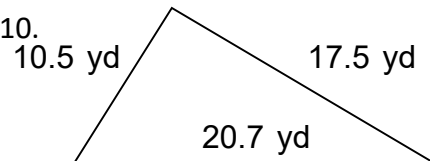
8.




9.



10.



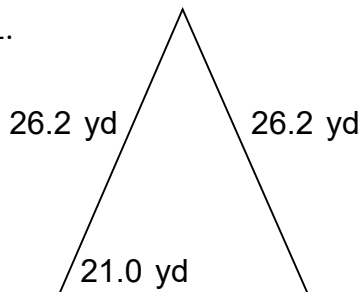


Name: \_\_\_\_\_

# Perimeter of Triangles

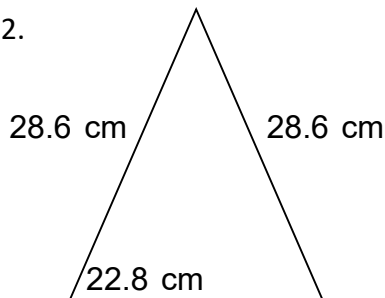
Find the perimeter of the triangles. Answer using the correct units.

1.



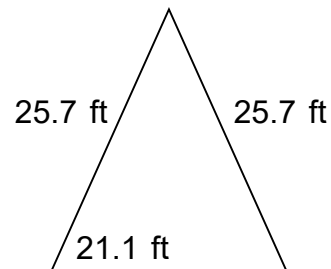
$$A = 252.04 \text{ yd}^2$$

2.



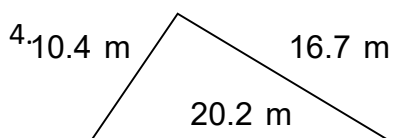
$$A = 299.02 \text{ cm}^2$$

3.



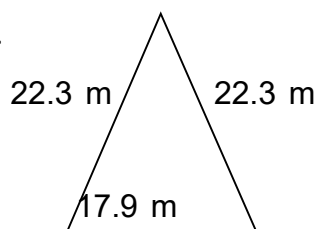
$$A = 247.24 \text{ ft}^2$$

4.



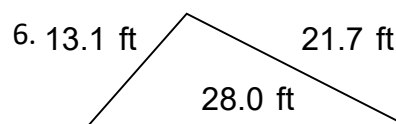
$$A = 86.66 \text{ m}^2$$

5.



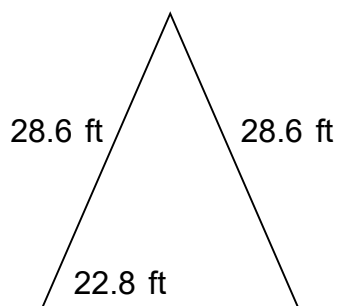
$$A = 182.80 \text{ m}^2$$

6.



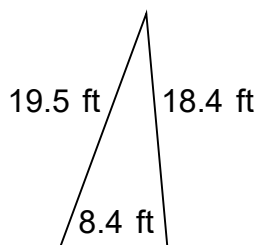
$$A = 138.04 \text{ ft}^2$$

7.



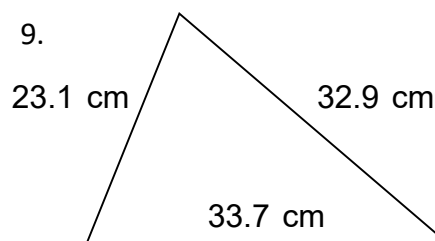
$$A = 299.02 \text{ ft}^2$$

8.



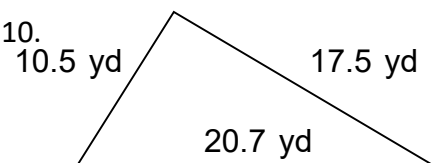
$$A = 76.86 \text{ ft}^2$$

9.



$$A = 360.93 \text{ cm}^2$$

10.



$$A = 92.22 \text{ yd}^2$$