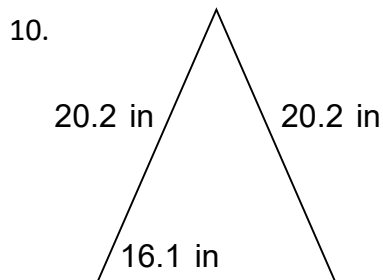
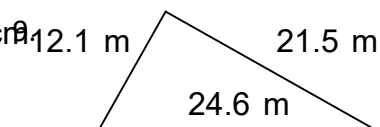
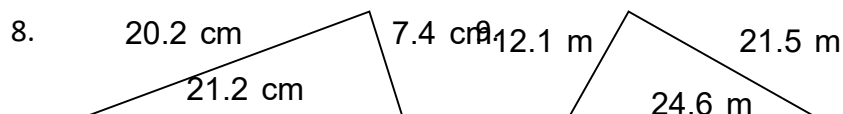
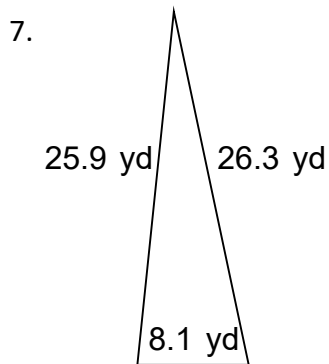
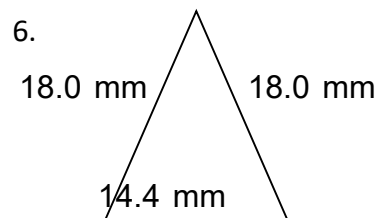
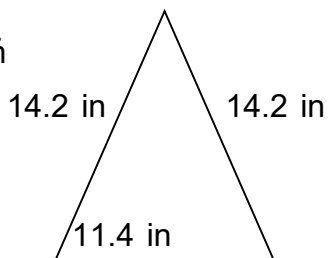
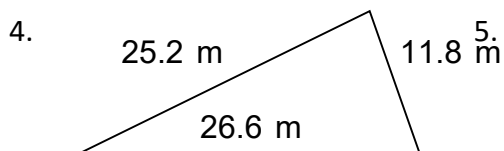
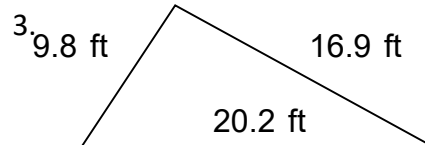
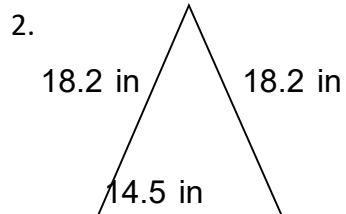
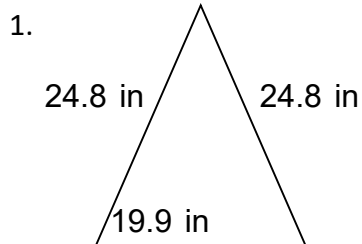



Name: _____

Perimeter of Triangles

Find the perimeter of the triangles. Answer using the correct units.



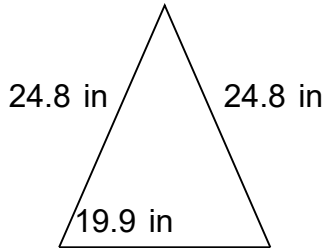


Name: _____

Perimeter of Triangles

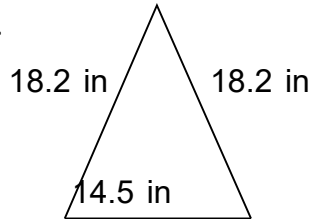
Find the perimeter of the triangles. Answer using the correct units.

1.



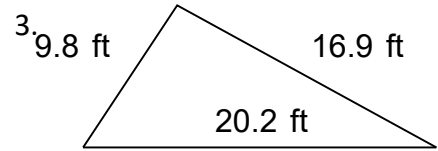
$$A = 226.02 \text{ in}^2$$

2.



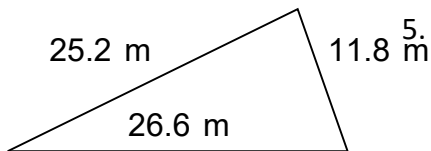
$$A = 121.03 \text{ in}^2$$

3.

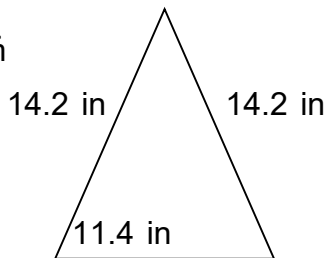


$$A = 82.21 \text{ ft}^2$$

4.

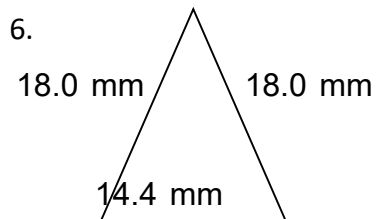


$$A = 147.63 \text{ m}^2$$



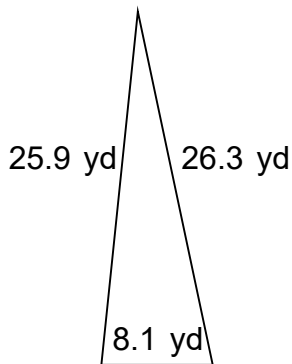
$$A = 74.13 \text{ in}^2$$

6.



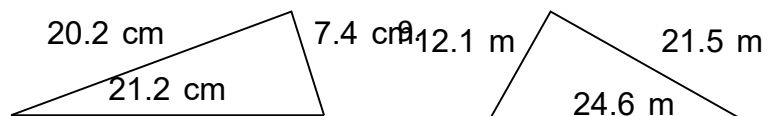
$$A = 118.78 \text{ mm}^2$$

7.

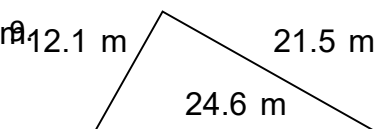


$$A = 104.33 \text{ yd}^2$$

8.

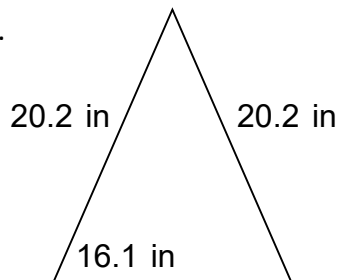


$$A = 74.41 \text{ cm}^2$$



$$A = 129.64 \text{ m}^2$$

10.



$$A = 149.14 \text{ in}^2$$