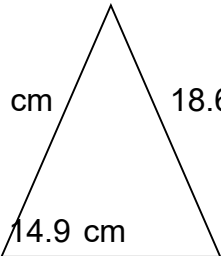
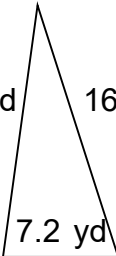
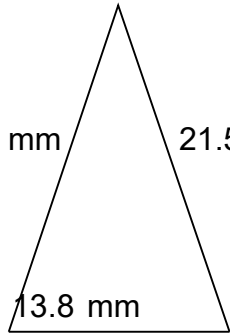
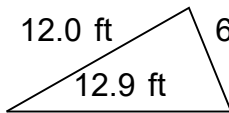
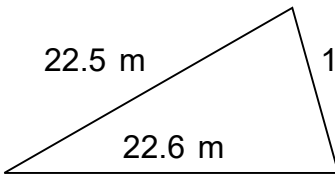
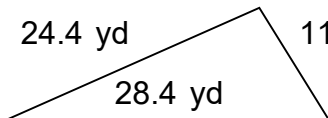
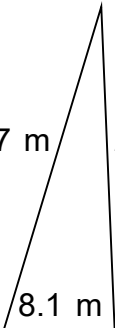
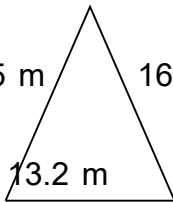
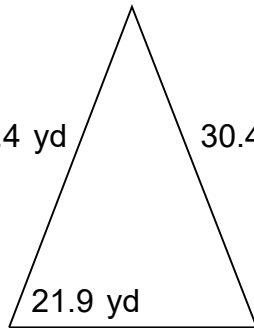
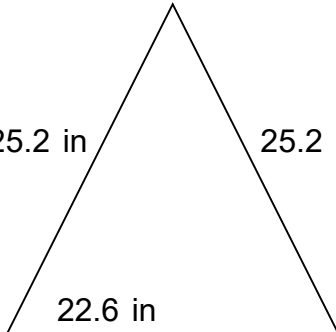



Name: _____

Perimeter of Triangles

Find the perimeter of the triangles. Answer using the correct units.

1. 
2. 
3. 
4. 
5. 
6. 
7. 
8. 
9. 
10. 

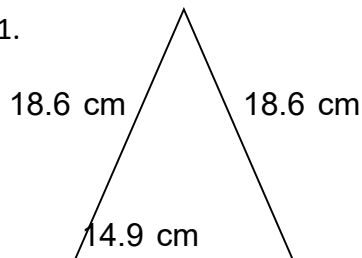


Name: _____

Perimeter of Triangles

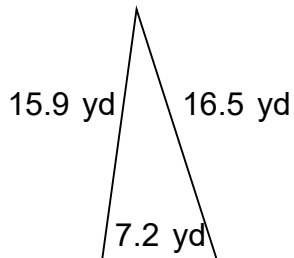
Find the perimeter of the triangles. Answer using the correct units.

1.



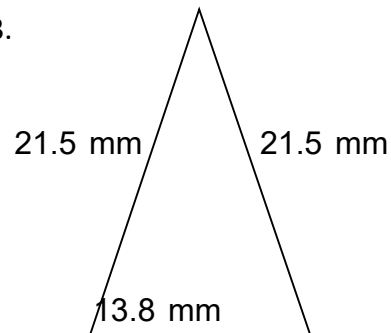
$$A = 126.97 \text{ cm}^2$$

2.



$$A = 56.59 \text{ yd}^2$$

3.



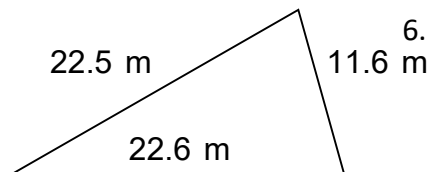
$$A = 140.50 \text{ mm}^2$$

4.



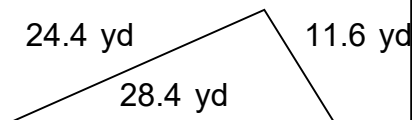
$$A = 38.31 \text{ ft}^2$$

5.



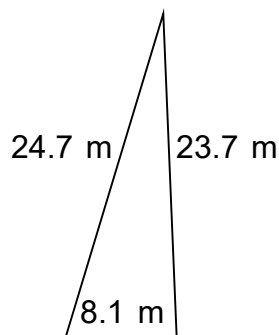
$$A = 126.33 \text{ m}^2$$

6.



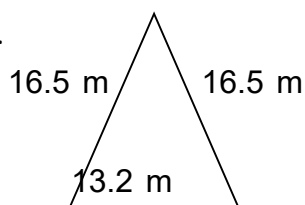
$$A = 140.01 \text{ yd}^2$$

7.



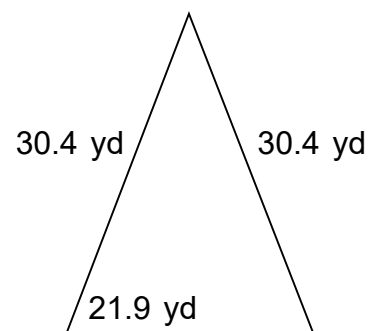
$$A = 95.82 \text{ m}^2$$

8.



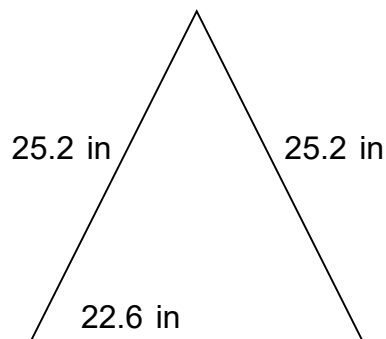
$$A = 99.81 \text{ m}^2$$

9.



$$A = 310.53 \text{ yd}^2$$

10.



$$A = 254.52 \text{ in}^2$$