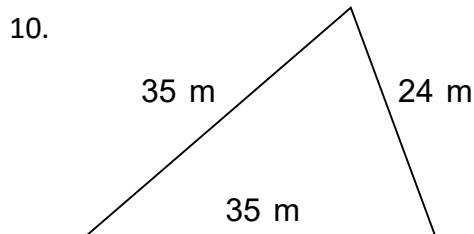
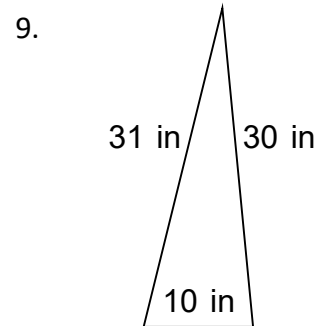
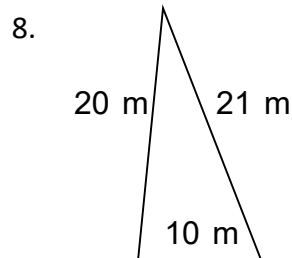
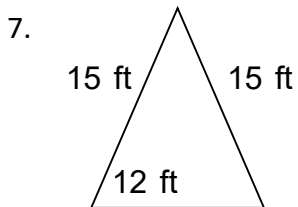
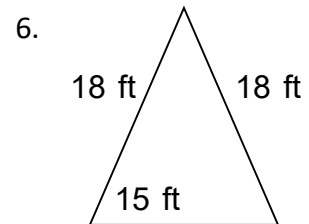
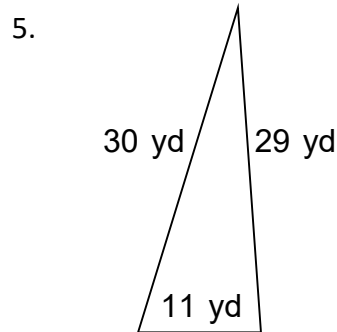
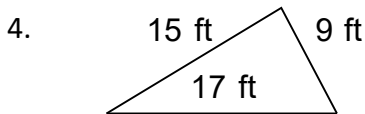
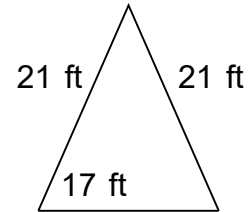
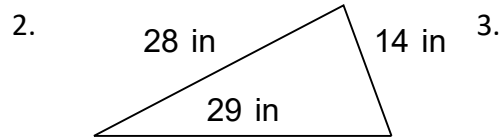
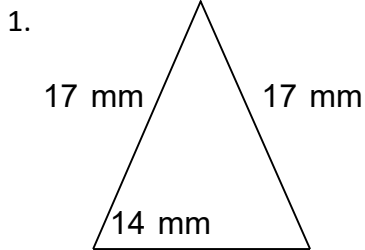



Name: \_\_\_\_\_

# Perimeter of Triangles

Find the perimeter of the triangles. Answer using the correct units.



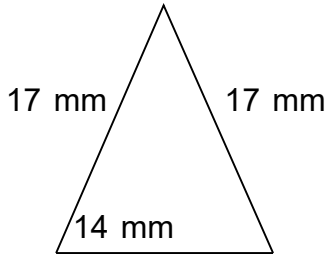


Name: \_\_\_\_\_

# Perimeter of Triangles

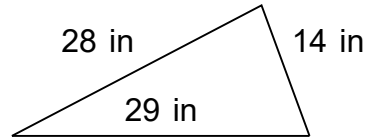
Find the perimeter of the triangles. Answer using the correct units.

1.



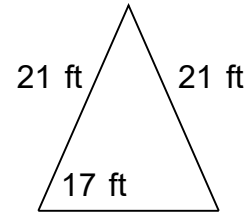
$$A = 108.43 \text{ mm}^2$$

2.



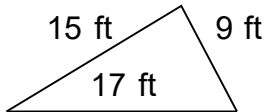
$$A = 187.34 \text{ in}^2$$

3.



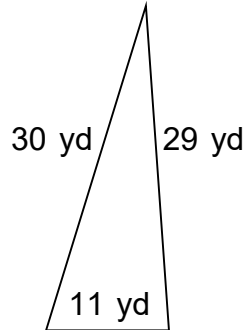
$$A = 163.2 \text{ ft}^2$$

4.



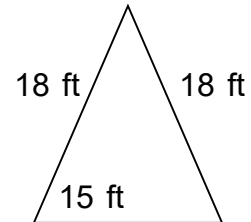
$$A = 65.45 \text{ ft}^2$$

5.



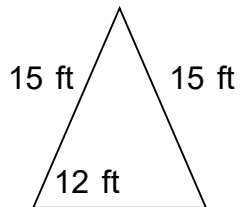
$$A = 158.02 \text{ yd}^2$$

6.



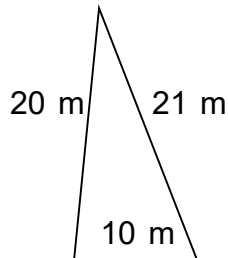
$$A = 122.7 \text{ ft}^2$$

7.



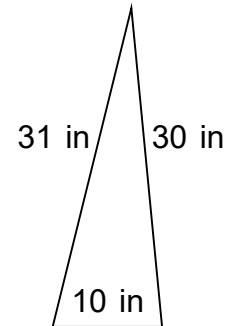
$$A = 82.5 \text{ ft}^2$$

8.



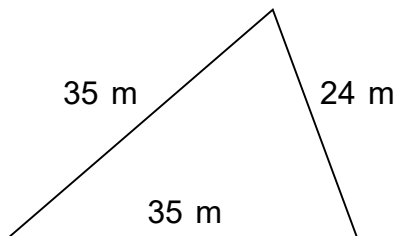
$$A = 98.25 \text{ m}^2$$

9.



$$A = 149.4 \text{ in}^2$$

10.



$$A = 395.68 \text{ m}^2$$