




Name: _____

What Time Was It?


Look at the time and draw the time to show what time it was:

1.




What time was it 1 hour 45 minutes ago?

2.




What time was it 3 hours 30 minutes ago?

3.




What time was it 2 hours 0 minutes ago?

4.




What time was it 2 hours 45 minutes ago?

5.




What time was it 1 hour 30 minutes ago?

6.




What time was it 2 hours 0 minutes ago?

7.



What time was it 3 hours 0 minutes ago?

8.



What time was it 3 hours 0 minutes ago?