

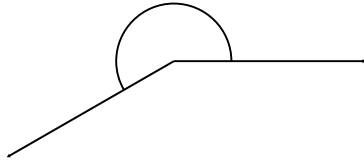
Name: _____

Name and Measure the Angle


Measure the degree of each angle and indicate if it is reflex, obtuse or acute.

Classify and measure the angles.

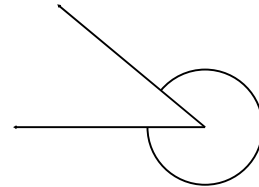
1.



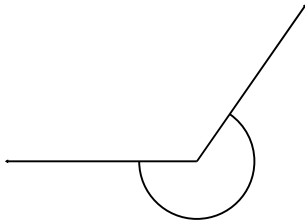
2.



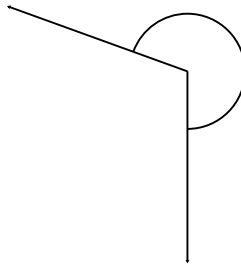
3.



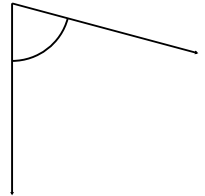
4.



5.




6.



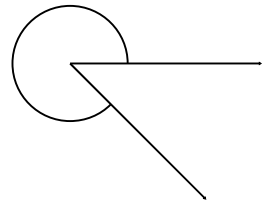
7.




8.



9.





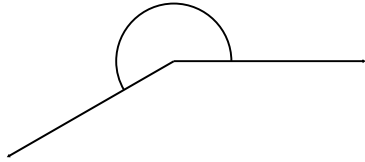
Name: _____

Name and Measure the Angle

Measure the degree of each angle and indicate if it is reflex, obtuse or acute.


Classify and measure the angles.

1.



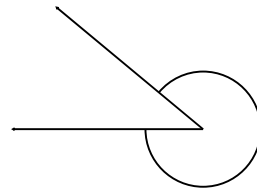
210° Reflex

2.



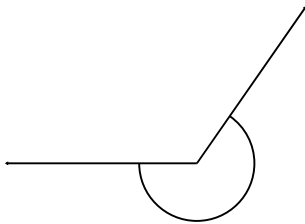
20° Acute

3.



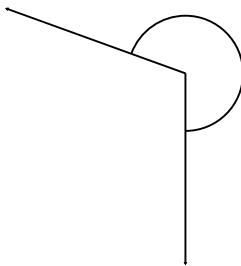
320° Reflex

4.



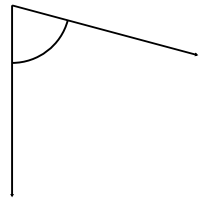
235° Reflex

5.



250° Reflex

6.




75° Acute

7.



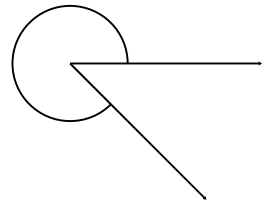
20° Acute

8.



290° Reflex

9.



315° Reflex