

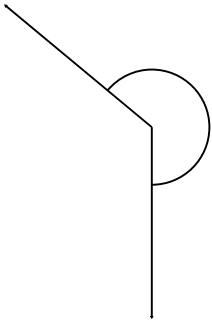
Name: \_\_\_\_\_

# Name and Measure the Angle

Measure the degree of each angle and indicate if it is reflex, obtuse or acute.

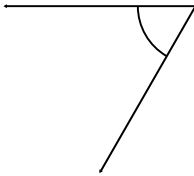
Classify and measure the angles.

1.




\_\_\_\_\_

2.



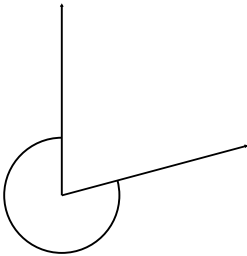
\_\_\_\_\_

3.



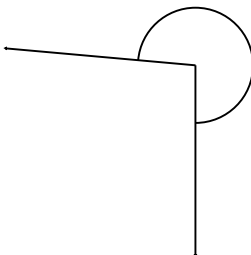
\_\_\_\_\_

4.



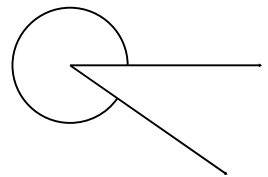
\_\_\_\_\_

5.



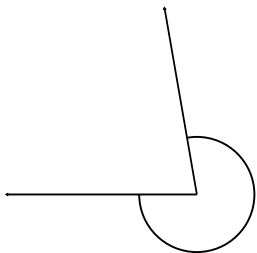
\_\_\_\_\_

6.




\_\_\_\_\_

7.



\_\_\_\_\_

8.



\_\_\_\_\_

9.



\_\_\_\_\_



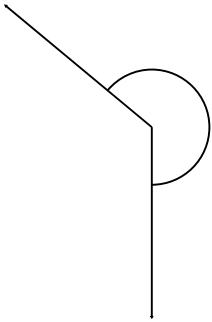
Name: \_\_\_\_\_

# Name and Measure the Angle

Measure the degree of each angle and indicate if it is reflex, obtuse or acute.

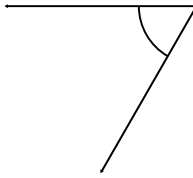
Classify and measure the angles.

1.




230° Reflex

2.



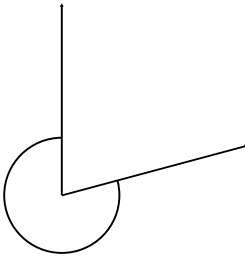
60° Acute

3.



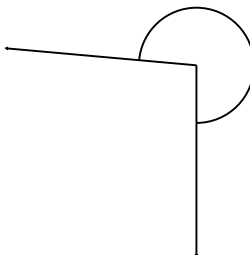
290° Reflex

4.



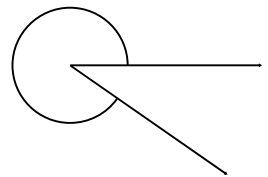
285° Reflex

5.



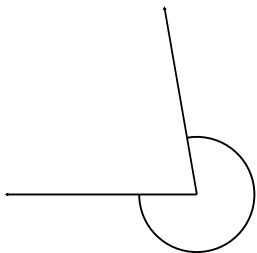
265° Reflex

6.




325° Reflex

7.



280° Reflex

8.



345° Reflex

9.



185° Reflex