

Name _____

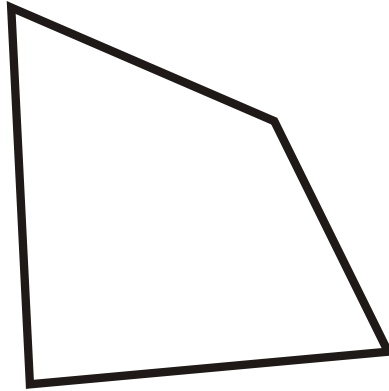
How Many Sides? Vertices?

Name the Polygon and show how many sides and vertices it has.

1.



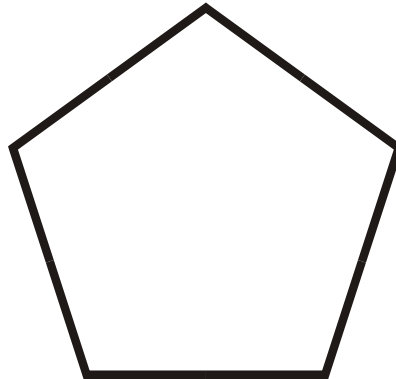
2.



3.



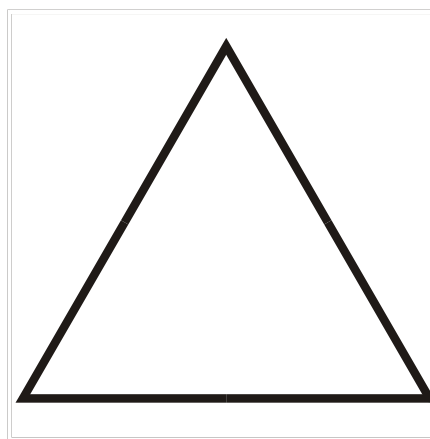
4.

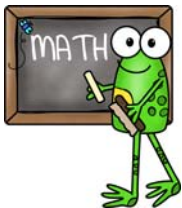


5.



6.





Name _____

How Many Sides? Vertices?

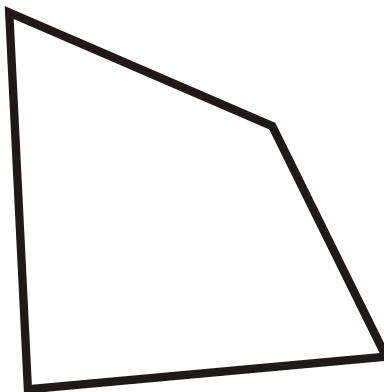
Name the Polygon and show how many sides and vertices it has.

1.




Parallelogram S=4 V=4

2.



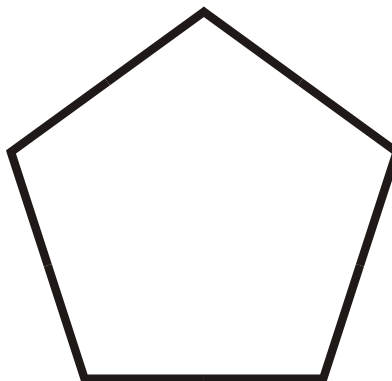
Irregular Quadrilateral S=4 V=4

3.



Trapezoid S=4 V=4

4.




Regular Pentagon S=5 V=5

5.



Scalene Triangle S=3 V=3

6.



Equilateral Triangle S=3 V=3