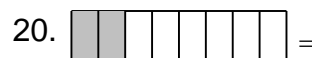
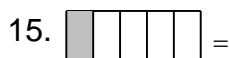




Name: _____

Identify the Fraction (Reduce to Lowest Terms Where Needed)

What is the fraction? Reduce when needed, for example $4/10 = 2/5$





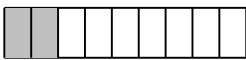
Name: _____

Identify the Fraction (Reduce to Lowest Terms Where Needed)


What is the fraction? Reduce when needed, for example $4/10 = 2/5$


1.  = $\frac{5}{6}$

2.  = $\frac{3}{4}$

3.  = $\frac{2}{9}$

4.  = $\frac{6}{7}$

5.  = $\frac{4}{6}$


6.  = $\frac{1}{4}$

7.  = $\frac{4}{5}$


8.  = $\frac{3}{7}$

9.  = $\frac{1}{3}$

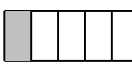
10.  = $\frac{8}{9}$

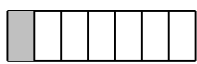
11.  = $\frac{3}{8}$

12.  = $\frac{7}{8}$

13.  = $\frac{1}{2}$

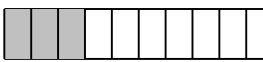
14.  = $\frac{7}{8}$


15.  = $\frac{1}{5}$

16.  = $\frac{1}{7}$

17.  = $\frac{7}{10}$

18.  = $\frac{2}{7}$

19.  = $\frac{3}{10}$

20.  = $\frac{2}{8}$