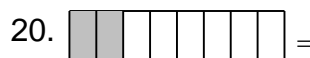


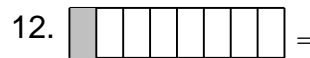

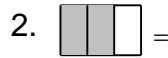




Name: _____

Identify the Fraction (Reduce to Lowest Terms Where Needed)

What is the fraction? Reduce when needed, for example $4/10 = 2/5$






Name: _____


Identify the Fraction (Reduce to Lowest Terms Where Needed)


What is the fraction? Reduce when needed, for example $4/10 = 2/5$


1.  = $\frac{4}{8}$

2.  = $\frac{2}{3}$

3.  = $\frac{6}{7}$

4.  = $\frac{1}{2}$

5.  = $\frac{3}{5}$

6.  = $\frac{1}{5}$


7.  = $\frac{1}{3}$

8.  = $\frac{4}{6}$


9.  = $\frac{7}{9}$

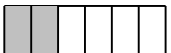
10.  = $\frac{3}{9}$


11.  = $\frac{2}{5}$

12.  = $\frac{1}{8}$

13.  = $\frac{4}{7}$

14.  = $\frac{2}{4}$


15.  = $\frac{2}{6}$

16.  = $\frac{1}{9}$

17.  = $\frac{8}{9}$

18.  = $\frac{7}{10}$

19.  = $\frac{6}{9}$

20.  = $\frac{2}{8}$