




Name: _____

Identify the Fraction (Reduce to Lowest Terms Where Needed)

What is the fraction? Reduce when needed, for example $4/10 = 2/5$

1.  =

2.  =

3.  =

4.  =


5.  =

6.  =

7.  =

8.  =

9.  =

10.  =

11.  =

12.  =

13.  =

14.  =

15.  =

16.  =

17.  =

18.  =

19.  =


20.  =



Name: _____


Identify the Fraction (Reduce to Lowest Terms Where Needed)


What is the fraction? Reduce when needed, for example $4/10 = 2/5$


1.  = $\frac{2}{3}$


2.  = $\frac{3}{4}$


3.  = $\frac{5}{6}$

4.  = $\frac{1}{8}$


5.  = $\frac{1}{3}$

6.  = $\frac{1}{4}$

7.  = $\frac{4}{6}$

8.  = $\frac{2}{8}$


9.  = $\frac{4}{9}$

10.  = $\frac{3}{10}$

11.  = $\frac{2}{5}$

12.  = $\frac{3}{9}$

13.  = $\frac{6}{8}$


14.  = $\frac{1}{2}$

15.  = $\frac{3}{7}$

16.  = $\frac{4}{8}$

17.  = $\frac{5}{7}$

18.  = $\frac{8}{9}$

19.  = $\frac{3}{6}$

20.  = $\frac{8}{10}$