

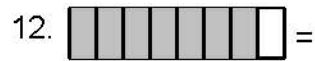









Name: _____

Identify the Fraction (Reduce to Lowest Terms Where Needed)

What is the fraction? Reduce when needed, for example $4/10 = 2/5$





Name: _____

Identify the Fraction (Reduce to Lowest Terms Where Needed)

What is the fraction? Reduce when needed, for example $4/10 = 2/5$

