





Name: _____

Identify the Fraction (Reduce to Lowest Terms Where Needed)

What is the fraction? Reduce when needed, for example $4/10 = 2/5$








Name: _____

Identify the Fraction (Reduce to Lowest Terms Where Needed)


What is the fraction? Reduce when needed, for example $4/10 = 2/5$


1.  = $\frac{6}{10}$

2.  = $\frac{3}{6}$

3.  = $\frac{2}{4}$


4.  = $\frac{7}{8}$

5.  = $\frac{2}{8}$


6.  = $\frac{4}{6}$


7.  = $\frac{5}{7}$


8.  = $\frac{6}{8}$


9.  = $\frac{1}{6}$

10.  = $\frac{4}{9}$

11.  = $\frac{2}{5}$

12.  = $\frac{1}{2}$

13.  = $\frac{1}{5}$


14.  = $\frac{2}{3}$

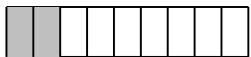
15.  = $\frac{3}{4}$

16.  = $\frac{6}{7}$

17.  = $\frac{9}{10}$

18.  = $\frac{5}{8}$

19.  = $\frac{4}{10}$

20.  = $\frac{2}{9}$