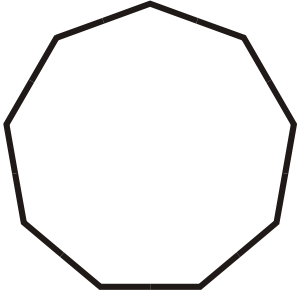



Name _____

Identify These Polygons

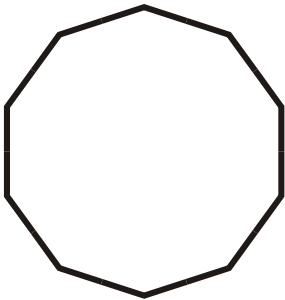
1.



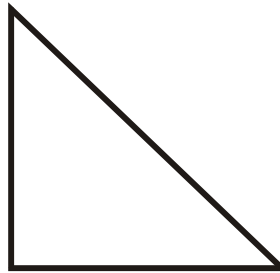
2.



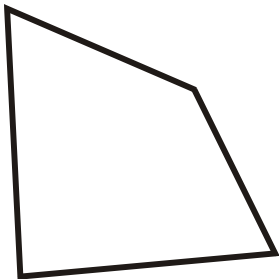
3.



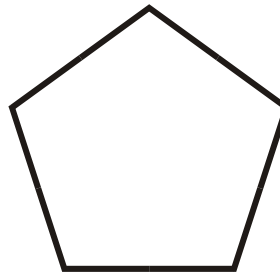
4.




5.



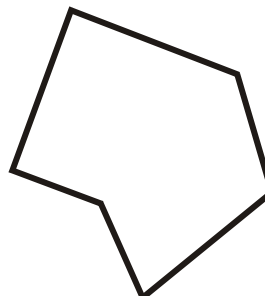
6.



7.




8.



- A. Irregular Hexagon
- D. Irregular Octagon
- G. Isosceles Triangle

- B. Regular Nonagon
- E. Irregular Quadrilateral
- H. Regular Pentagon

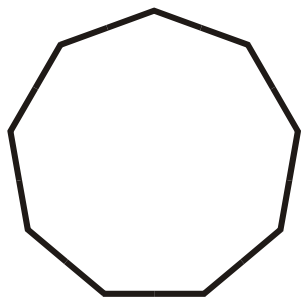
- C. Regular Decagon
- F. Right Triangle



Name _____


Identify These Polygons

1.



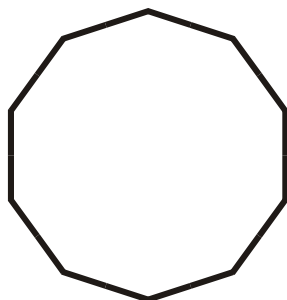
Regular Nonagon

2.



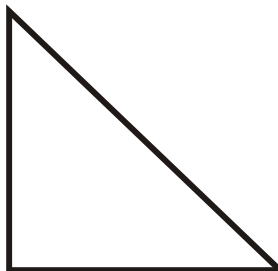
Irregular Octagon

3.



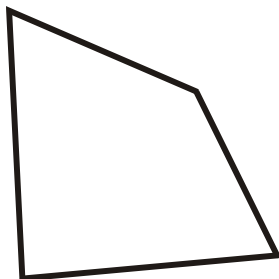
Regular Decagon

4.



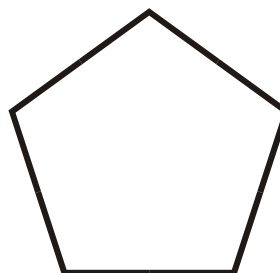
Right Triangle

5.




Irregular Quadrilateral

6.



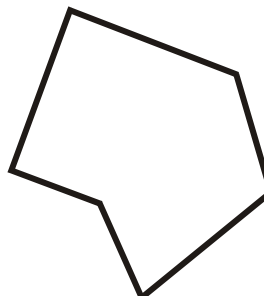
Regular Pentagon

7.



Isosceles Triangle

8.



Irregular Hexagon

- A. Irregular Hexagon
- D. Irregular Octagon
- G. Isosceles Triangle

- B. Regular Nonagon
- E. Irregular Quadrilateral
- H. Regular Pentagon

- C. Regular Decagon
- F. Right Triangle