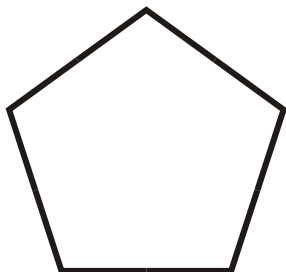


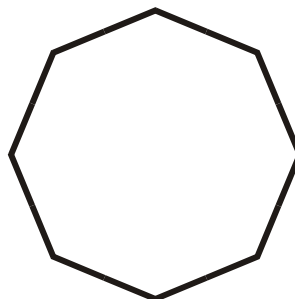
Name _____

Identify These Polygons


1.



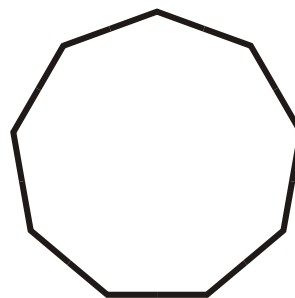
2.




3.




4.



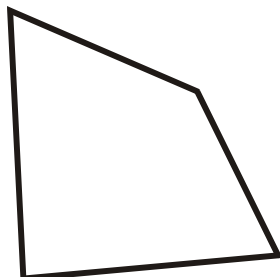
5.



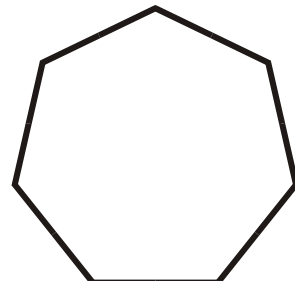
6.



7.




8.



- A. Irregular Nonagon
- D. Regular Pentagon
- G. Regular Heptagon

- B. Irregular Quadrilateral
- E. Regular Nonagon
- H. Isosceles Triangle

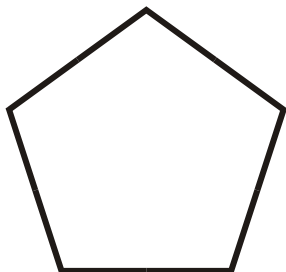
- C. Irregular Octagon
- F. Regular Octagon



Name _____

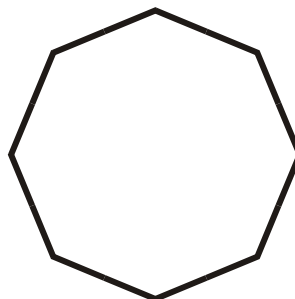
Identify These Polygons

1.




Regular Pentagon

2.



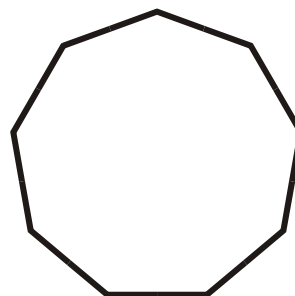
Regular Octagon

3.




Irregular Nonagon

4.




Regular Nonagon

5.



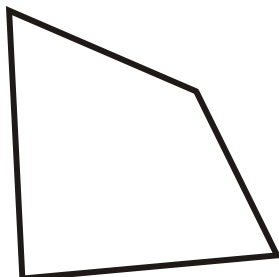
Isosceles Triangle

6.



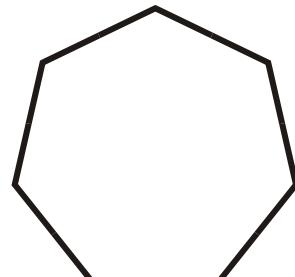
Irregular Octagon

7.



Irregular Quadrilateral

8.



Regular Heptagon

- A. Irregular Nonagon
- D. Regular Pentagon
- G. Regular Heptagon

- B. Irregular Quadrilateral
- E. Regular Nonagon
- H. Isosceles Triangle

- C. Irregular Octagon
- F. Regular Octagon