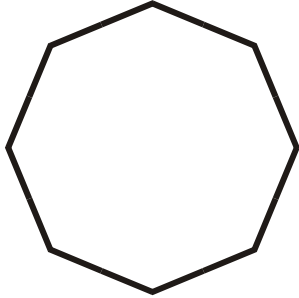



Name _____

Identify These Polygons


1.



2.



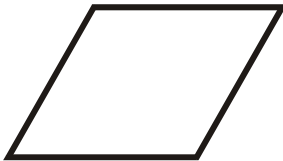
3.



4.



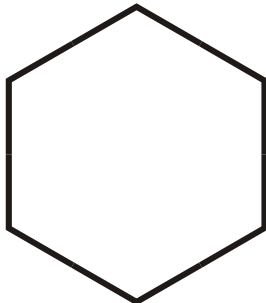
5.



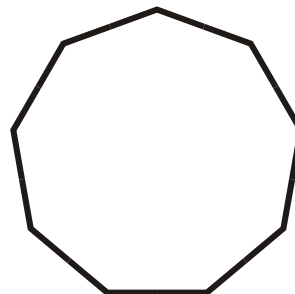
6.



7.




8.



- A. Rhombus
- D. Regular Hexagon
- G. Regular Octagon

- B. Parallelogram
- E. Trapezoid
- H. Regular Nonagon

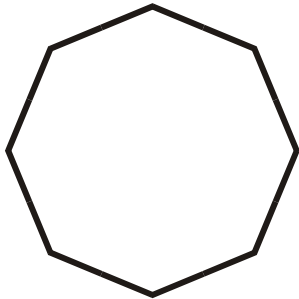
- C. Irregular Pentagon
- F. Irregular Octagon



Name _____


Identify These Polygons

1.




Regular Octagon

2.



Irregular Pentagon

3.



Irregular Octagon

4.



Trapezoid

5.



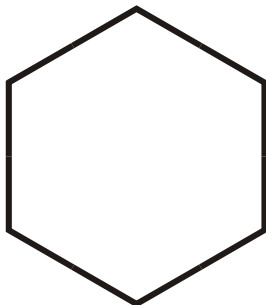
Rhombus

6.



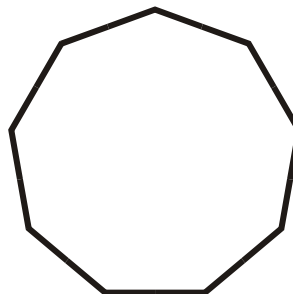
Parallelogram

7.



Regular Hexagon

8.



Regular Nonagon

- A. Rhombus
- D. Regular Hexagon
- G. Regular Octagon

- B. Parallelogram
- E. Trapezoid
- H. Regular Nonagon

- C. Irregular Pentagon
- F. Irregular Octagon