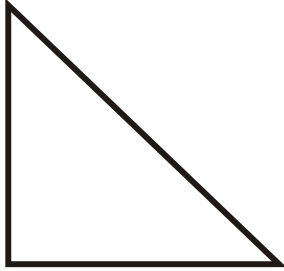


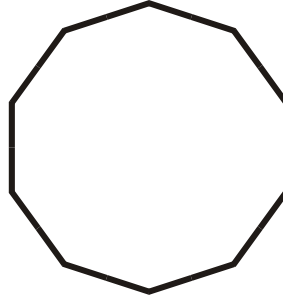
Name _____

Identify These Polygons

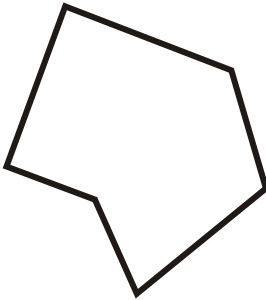
1.



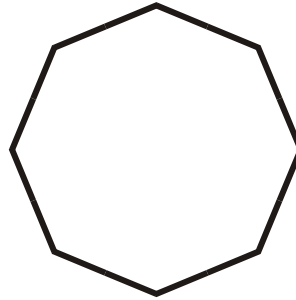
2.



3.




4.



5.



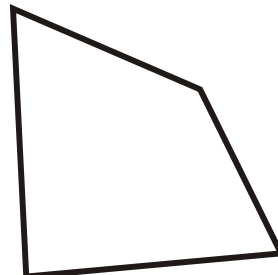
6.



7.



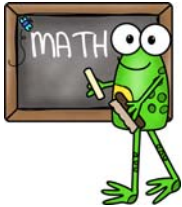
8.



- A. Irregular Quadrilateral
- D. Regular Decagon
- G. Irregular Heptagon

- B. Irregular Hexagon
- E. Parallelogram
- H. Trapezoid

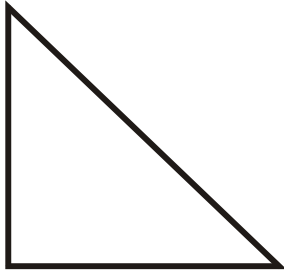
- C. Regular Octagon
- F. Right Triangle



Name _____

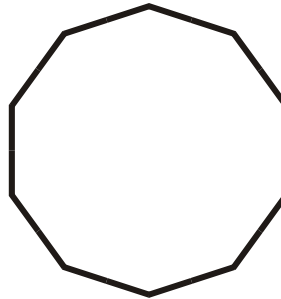
Identify These Polygons

1.



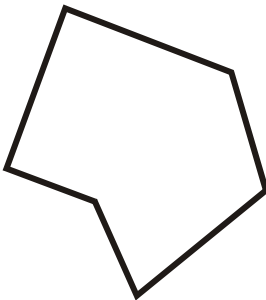
Right Triangle

2.



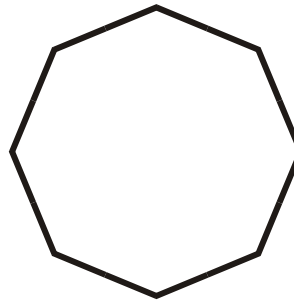
Regular Decagon

3.



Irregular Hexagon

4.




Regular Octagon

5.



Trapezoid

6.



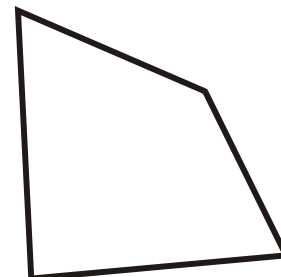
Irregular Heptagon

7.



Parallelogram

8.



Irregular Quadrilateral

- A. Irregular Quadrilateral
- D. Regular Decagon
- G. Irregular Heptagon

- B. Irregular Hexagon
- E. Parallelogram
- H. Trapezoid

- C. Regular Octagon
- F. Right Triangle