



Name: _____



Identify the Fraction in the Shaded Strips

Identify the fraction.

1.  = _____

2.  = _____

3.  = _____

4.  = _____

5.  = _____

6.  = _____

7.  = _____

8.  = _____

9.  = _____

10.  = _____

11.  = _____

12.  = _____

13.  = _____

14.  = _____

15.  = _____

16.  = _____


17.  = _____

18.  = _____

19.  = _____

20.  = _____


Name: _____



Identify the Fraction in the Shaded Strips

Identify the fraction.

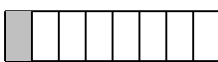
1.  = $\frac{2}{3}$ _____


2.  = $\frac{5}{8}$ _____

3.  = $\frac{3}{5}$ _____

4.  = $\frac{1}{4}$ _____

5.  = $\frac{4}{5}$ _____

6.  = $\frac{1}{8}$ _____

7.  = $\frac{5}{6}$ _____

8.  = $\frac{1}{2}$ _____


9.  = $\frac{1}{3}$ _____

10.  = $\frac{1}{5}$ _____


11.  = $\frac{4}{6}$ _____

12.  = $\frac{3}{4}$ _____


13.  = $\frac{2}{6}$ _____

14.  = $\frac{4}{8}$ _____

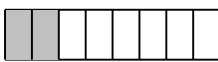
15.  = $\frac{3}{6}$ _____

16.  = $\frac{3}{8}$ _____

17.  = $\frac{1}{6}$ _____

18.  = $\frac{6}{8}$ _____

19.  = $\frac{2}{4}$ _____

20.  = $\frac{2}{8}$ _____