
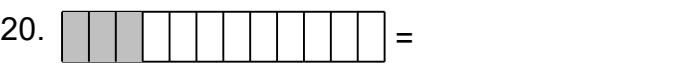
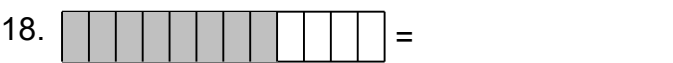
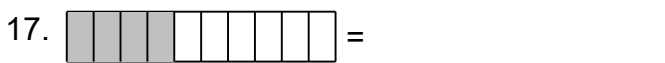
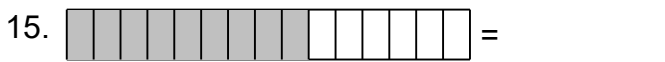
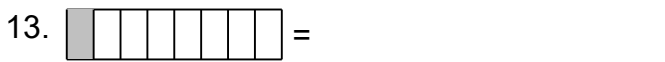
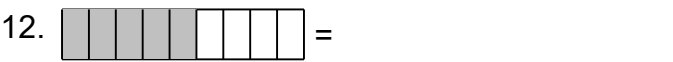
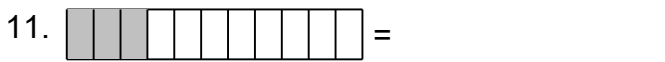
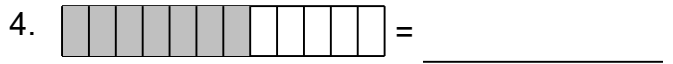
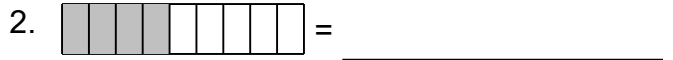


Name: _____




Identify the Fraction in the Shaded Strips

Identify the fraction.


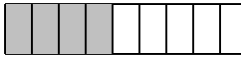



Name: _____





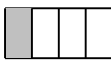
Identify the Fraction in the Shaded Strips


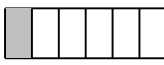
Identify the fraction.

1.  = $\frac{3}{10}$ 2.  = $\frac{4}{9}$ _____

3.  = $\frac{4}{5}$ _____ 4.  = $\frac{7}{12}$ _____

5.  = $\frac{1}{3}$ _____ 6.  = $\frac{1}{2}$ _____

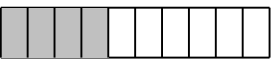

7.  = $\frac{13}{15}$ _____ 8.  = $\frac{1}{4}$ _____


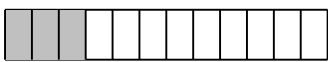
9.  = $\frac{1}{5}$ _____ 10.  = $\frac{1}{6}$ _____

11.  = $\frac{3}{11}$ _____ 12.  = $\frac{5}{9}$ _____

13.  = $\frac{1}{8}$ _____ 14.  = $\frac{1}{3}$ _____

15.  = $\frac{3}{10}$ _____ 16.  = $\frac{2}{7}$ _____

17.  = $\frac{2}{5}$ _____ 18.  = $\frac{6}{9}$ _____

19.  = $\frac{13}{16}$ _____ 20.  = $\frac{3}{12}$ _____