


Name: _____



Identify the Fraction in the Shaded Strips


Identify the fraction.

1.  = _____

2.  = _____

3.  = _____

4.  = _____

5.  = _____

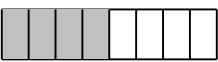
6.  = _____

7.  = _____


8.  = _____

9.  = _____


10.  = _____

11.  = _____

12.  = _____

13.  = _____

14.  = _____

15.  = _____

16.  = _____


17.  = _____

18.  = _____

19.  = _____

20.  = _____

Name: _____



Identify the Fraction in the Shaded Strips

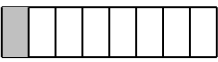
Identify the fraction.

1.  = $\frac{1}{3}$ _____

2.  = $\frac{4}{5}$ _____

3.  = $\frac{1}{6}$ _____

4.  = $\frac{1}{2}$ _____


5.  = $\frac{1}{8}$ _____

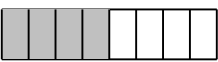
6.  = $\frac{2}{3}$ _____

7.  = $\frac{1}{5}$ _____


8.  = $\frac{2}{5}$ _____

9.  = $\frac{1}{2}$ _____

10.  = $\frac{5}{8}$ _____


11.  = $\frac{1}{2}$ _____

12.  = $\frac{3}{4}$ _____

13.  = $\frac{3}{4}$ _____

14.  = $\frac{1}{5}$ _____

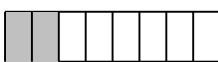
15.  = $\frac{1}{4}$ _____

16.  = $\frac{3}{8}$ _____

17.  = $\frac{3}{5}$ _____

18.  = $\frac{2}{3}$ _____

19.  = $\frac{1}{2}$ _____

20.  = $\frac{1}{4}$ _____