


Name: \_\_\_\_\_



# Identify the Fraction in the Shaded Strips


Identify the fraction.

1.  = \_\_\_\_\_

2.  = \_\_\_\_\_

3.  = \_\_\_\_\_

4.  = \_\_\_\_\_

5.  = \_\_\_\_\_


6.  = \_\_\_\_\_

7.  = \_\_\_\_\_

8.  = \_\_\_\_\_

9.  = \_\_\_\_\_

10.  = \_\_\_\_\_

11.  = \_\_\_\_\_

12.  = \_\_\_\_\_

13.  = \_\_\_\_\_

14.  = \_\_\_\_\_

15.  = \_\_\_\_\_

16.  = \_\_\_\_\_


17.  = \_\_\_\_\_

18.  = \_\_\_\_\_

19.  = \_\_\_\_\_

20.  = \_\_\_\_\_

Name: \_\_\_\_\_



# Identify the Fraction in the Shaded Strips


Identify the fraction.

1.  =  $\frac{2}{3}$  \_\_\_\_\_

2.  =  $\frac{2}{5}$  \_\_\_\_\_

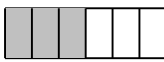
3.  =  $\frac{2}{3}$  \_\_\_\_\_

4.  =  $\frac{1}{2}$  \_\_\_\_\_

5.  =  $\frac{7}{8}$  \_\_\_\_\_


6.  =  $\frac{1}{4}$  \_\_\_\_\_

7.  =  $\frac{1}{3}$  \_\_\_\_\_

8.  =  $\frac{1}{2}$  \_\_\_\_\_

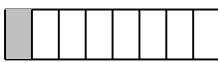
9.  =  $\frac{3}{4}$  \_\_\_\_\_

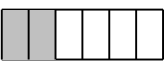
10.  =  $\frac{5}{6}$  \_\_\_\_\_

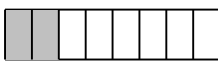
11.  =  $\frac{5}{8}$  \_\_\_\_\_

12.  =  $\frac{3}{5}$  \_\_\_\_\_

13.  =  $\frac{1}{5}$  \_\_\_\_\_

14.  =  $\frac{1}{8}$  \_\_\_\_\_


15.  =  $\frac{1}{3}$  \_\_\_\_\_

16.  =  $\frac{1}{4}$  \_\_\_\_\_

17.  =  $\frac{4}{5}$  \_\_\_\_\_

18.  =  $\frac{1}{6}$  \_\_\_\_\_

19.  =  $\frac{1}{2}$  \_\_\_\_\_

20.  =  $\frac{1}{2}$  \_\_\_\_\_