

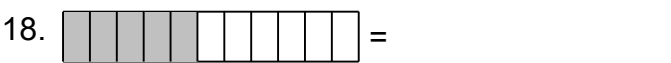
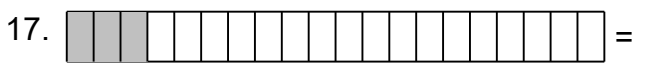
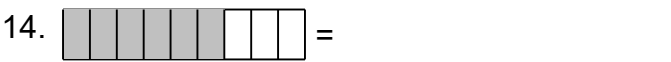
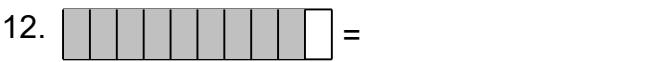
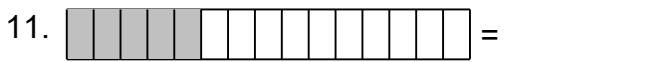
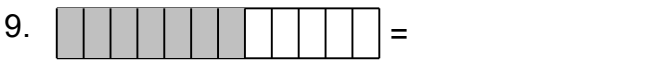
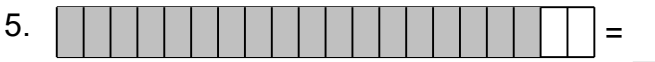
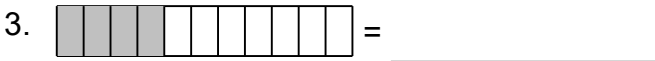
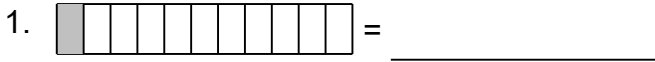


Name: _____




Identify the Fraction in the Shaded Strips

Identify the fraction.

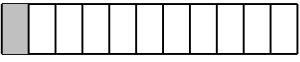


Name: _____

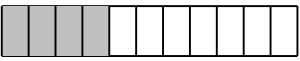


Identify the Fraction in the Shaded Strips

Identify the fraction.

1.  = $\frac{1}{11}$ _____

2.  = $\frac{1}{6}$ _____

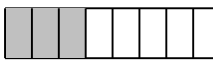
3.  = $\frac{4}{11}$ _____

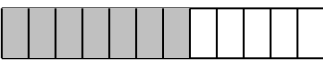
4.  = $\frac{1}{2}$ _____


5.  = $\frac{9}{10}$ _____


6.  = $\frac{1}{5}$ _____


7.  = $\frac{1}{3}$ _____

8.  = $\frac{3}{8}$ _____


9.  = $\frac{7}{12}$ _____

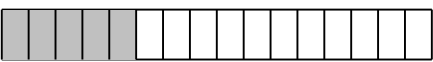
10.  = $\frac{6}{7}$ _____

11.  = $\frac{1}{3}$ _____

12.  = $\frac{9}{10}$ _____


13.  = $\frac{1}{2}$ _____

14.  = $\frac{2}{3}$ _____


15.  = $\frac{5}{16}$ _____

16.  = $\frac{4}{5}$ _____

17.  = $\frac{3}{20}$ _____

18.  = $\frac{5}{11}$ _____

19.  = $\frac{15}{16}$ _____

20.  = $\frac{5}{7}$ _____