



Name: _____


Fact Families

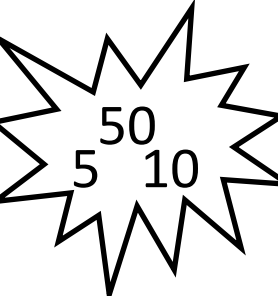
$9 \times 7 = 63$		$63 \div 7 = 9$
$7 \times 9 = 63$		$63 \div 9 = 7$


Complete the Multiplication/Division fact families using only the 3 numbers given:

—	\times	—	=	—		—	\div	—	=	—
—	\times	—	=	—		—	\div	—	=	—

—	\times	—	=	—		—	\div	—	=	—
—	\times	—	=	—		—	\div	—	=	—

—	\times	—	=	—		—	\div	—	=	—
—	\times	—	=	—		—	\div	—	=	—

—	\times	—	=	—		—	\div	—	=	—
—	\times	—	=	—		—	\div	—	=	—

—	\times	—	=	—		—	\div	—	=	—
—	\times	—	=	—		—	\div	—	=	—