



Name: _____

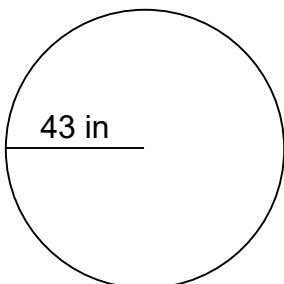
Circumference of Circles

Can you calculate the circumference of each circle given the radius?

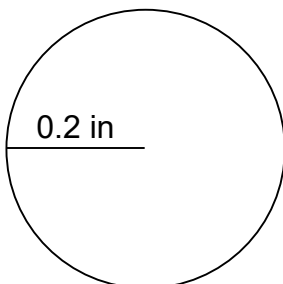
$$C = 2\pi \times r$$

Calculate the circumference of each circle.

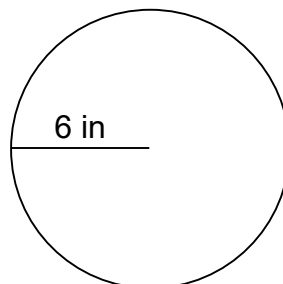
1.



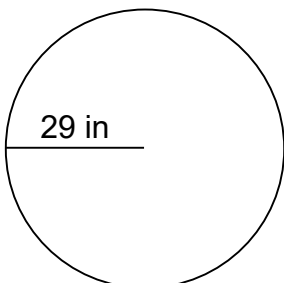
2.



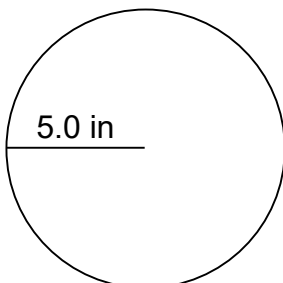
3.



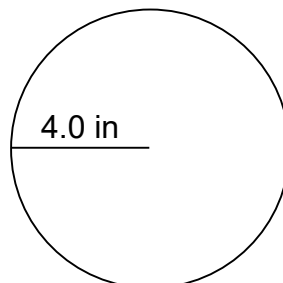
4.



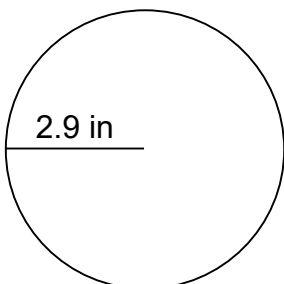
5.



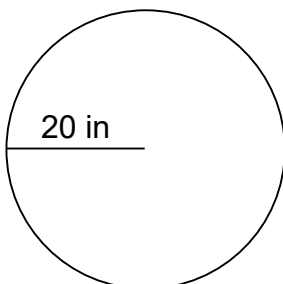
6.



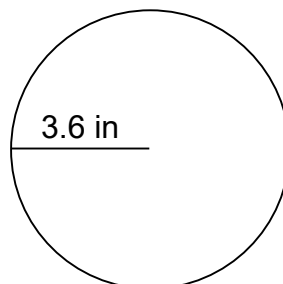
7.



8.



9.





Name: _____

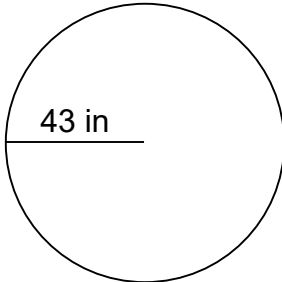
Circumference of Circles

Can you calculate the circumference of each circle given the radius?

$$C = 2\pi \times r$$

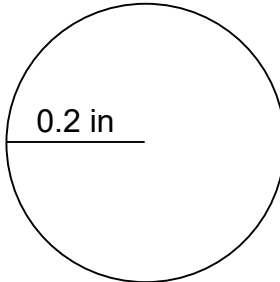
Calculate the circumference and area of each circle.

1.



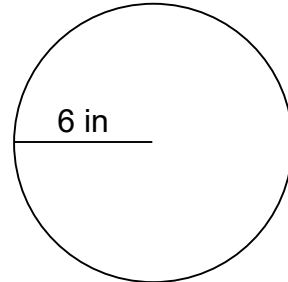
$$C=270.04 \text{ in}$$

2.



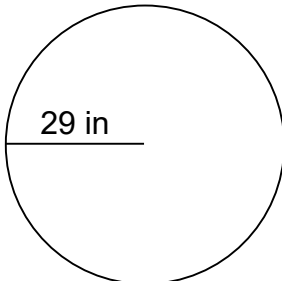
$$C=1.256 \text{ in}$$

3.



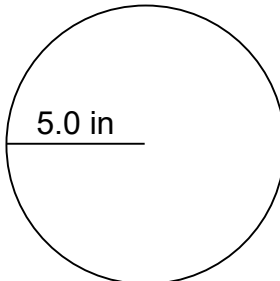
$$C=37.68 \text{ in}$$

4.



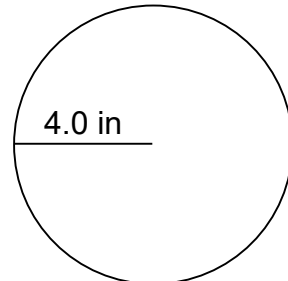
$$C=182.12 \text{ in}$$

5.



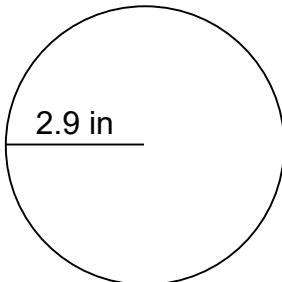
$$C=31.400 \text{ in}$$

6.



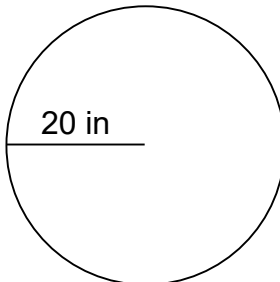
$$C=25.120 \text{ in}$$

7.



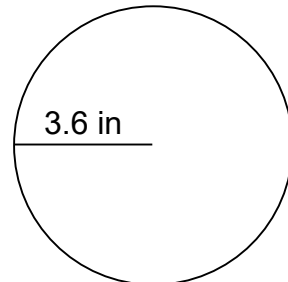
$$C=18.212 \text{ in}$$

8.



$$C=125.60 \text{ in}$$

9.



$$C=22.608 \text{ in}$$