



Name: \_\_\_\_\_

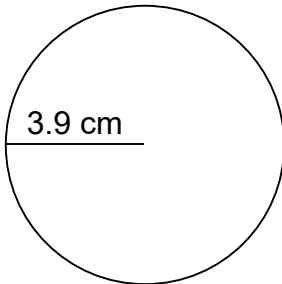
# Circumference of Circles

Can you calculate the circumference of each circle given the radius?

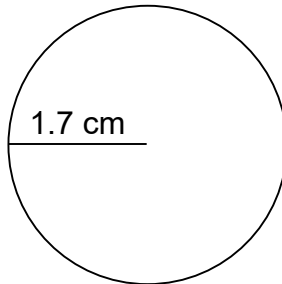
$$C = 2\pi \times r$$

Calculate the circumference of each circle.

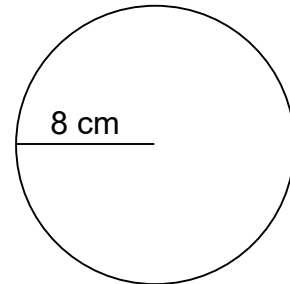
1.



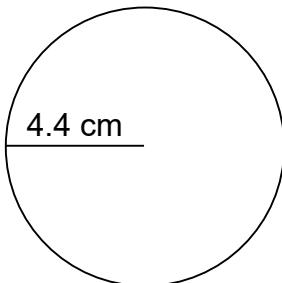
2.



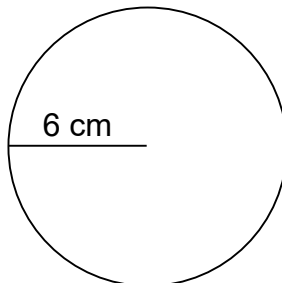
3.



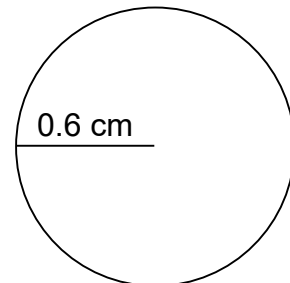
4.



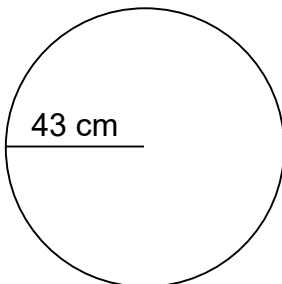
5.



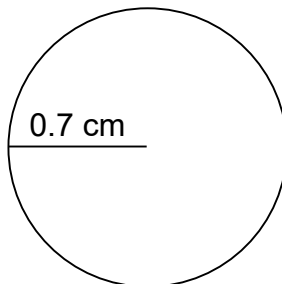
6.



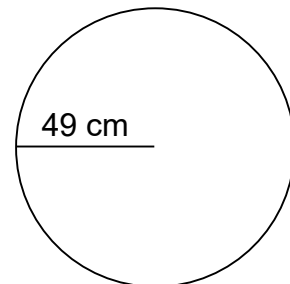
7.



8.



9.





Name: \_\_\_\_\_

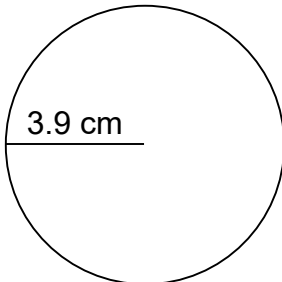
# Circumference of Circles

Can you calculate the circumference of each circle given the radius?

$$C = 2\pi \times r$$

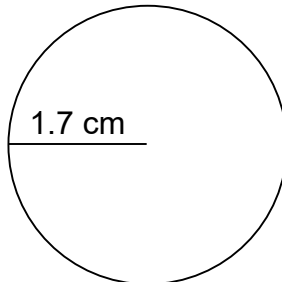
Calculate the circumference and area of each circle.

1.



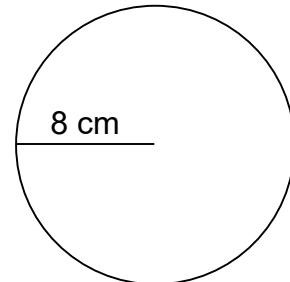
$$C=24.492 \text{ cm}$$

2.



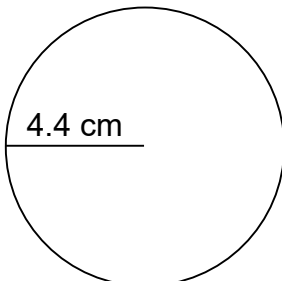
$$C=10.676 \text{ cm}$$

3.



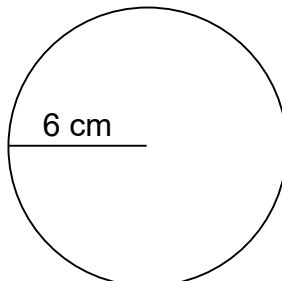
$$C=50.24 \text{ cm}$$

4.



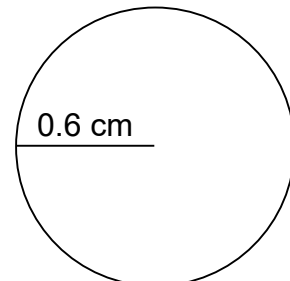
$$C=27.632 \text{ cm}$$

5.



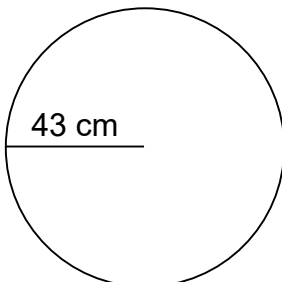
$$C=37.68 \text{ cm}$$

6.



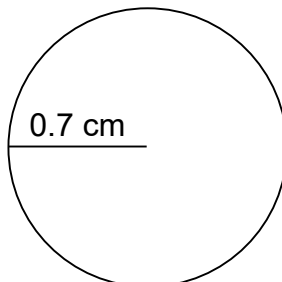
$$C=3.768 \text{ cm}$$

7.



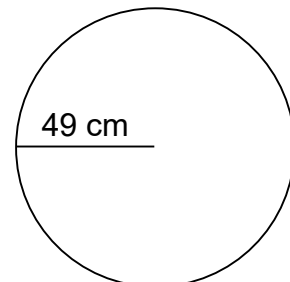
$$C=270.04 \text{ cm}$$

8.



$$C=4.396 \text{ cm}$$

9.



$$C=307.72 \text{ cm}$$