



Name: _____

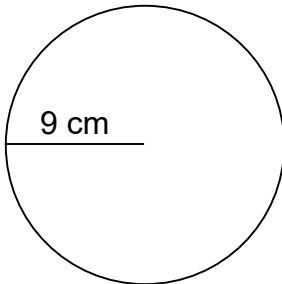
Circumference of Circles

Can you calculate the circumference of each circle given the radius?

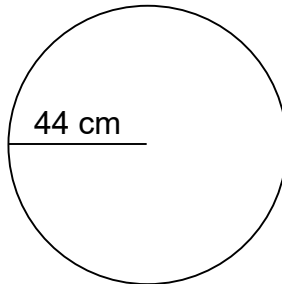
$$C = 2\pi \times r$$

Calculate the circumference of each circle.

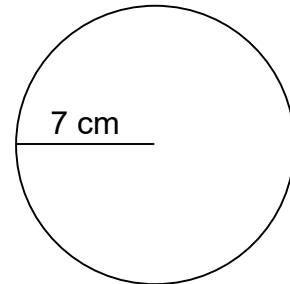
1.



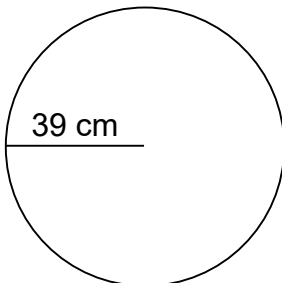
2.



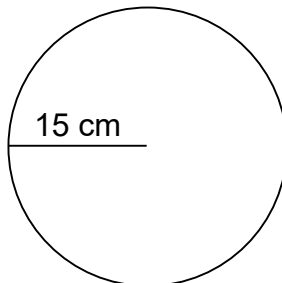
3.



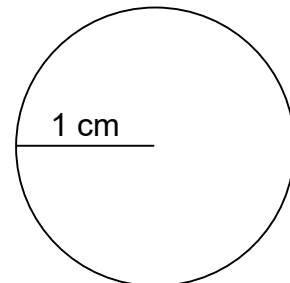
4.



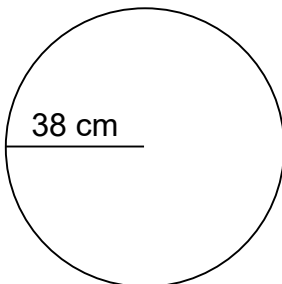
5.



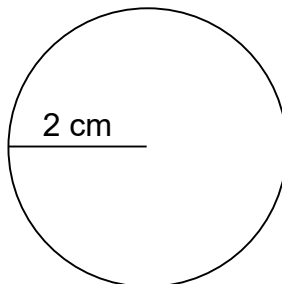
6.



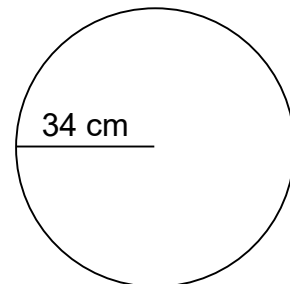
7.



8.



9.





Name: _____

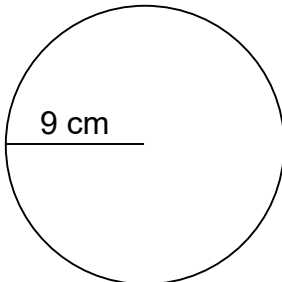
Circumference of Circles

Can you calculate the circumference of each circle given the radius?

$$C = 2\pi \times r$$

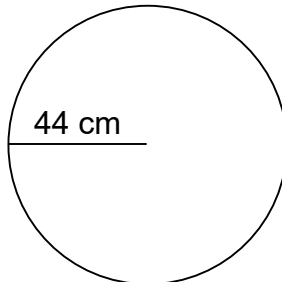
Calculate the circumference and area of each circle.

1.



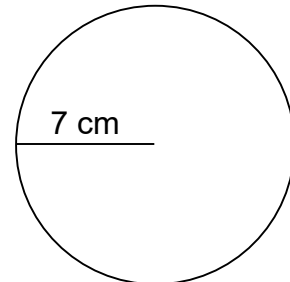
$$C = 56.52 \text{ cm}$$

2.



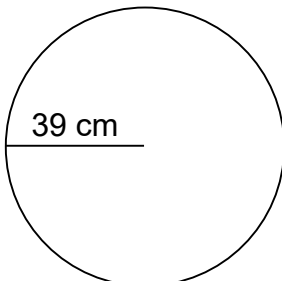
$$C = 276.32 \text{ cm}$$

3.



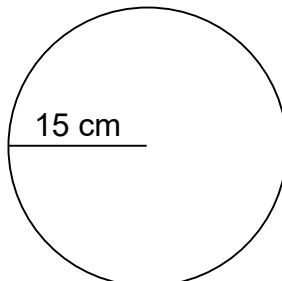
$$C = 43.96 \text{ cm}$$

4.



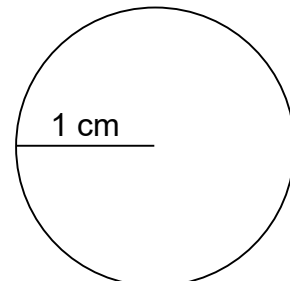
$$C = 244.92 \text{ cm}$$

5.



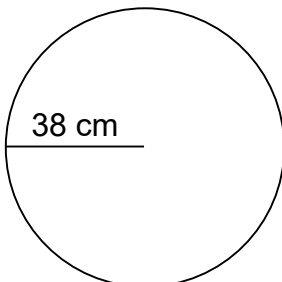
$$C = 94.20 \text{ cm}$$

6.



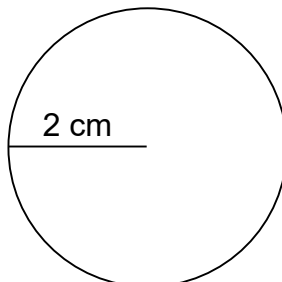
$$C = 6.28 \text{ cm}$$

7.



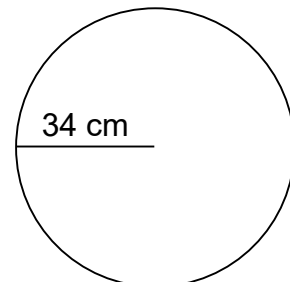
$$C = 238.64 \text{ cm}$$

8.



$$C = 12.56 \text{ cm}$$

9.



$$C = 213.52 \text{ cm}$$