



Name: _____

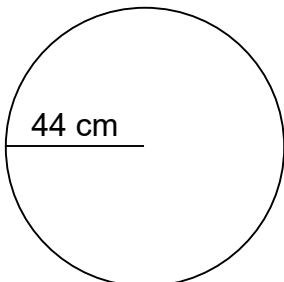
Circumference of Circles

Can you calculate the circumference of each circle given the radius?

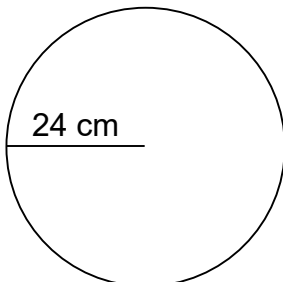
$$C = 2\pi \times r$$

Calculate the circumference of each circle.

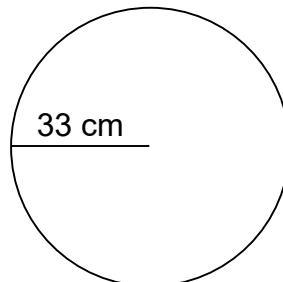
1.



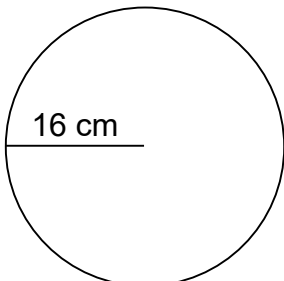
2.



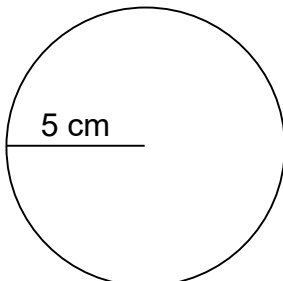
3.



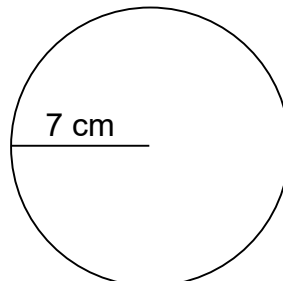
4.



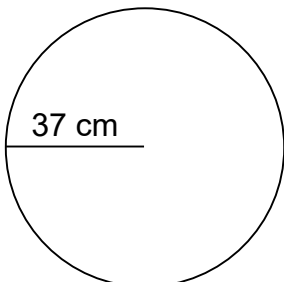
5.



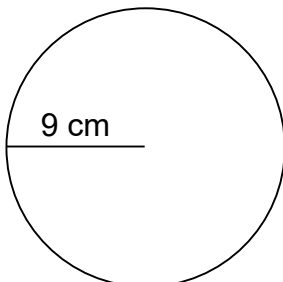
6.



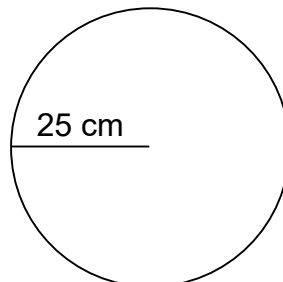
7.



8.



9.





Name: _____

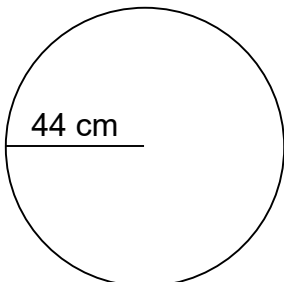
Circumference of Circles

Can you calculate the circumference of each circle given the radius?

$$C = 2\pi \times r$$

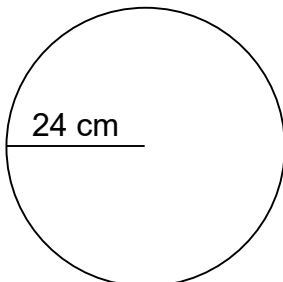
Calculate the circumference and area of each circle.

1.



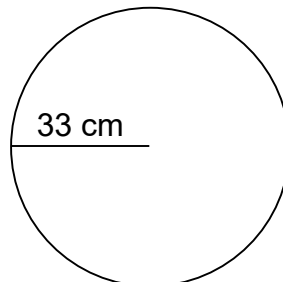
$$C=276.32 \text{ cm}$$

2.



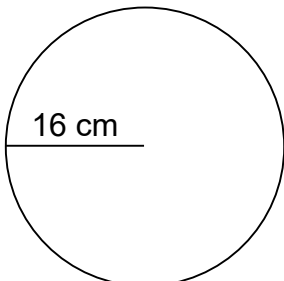
$$C=150.72 \text{ cm}$$

3.



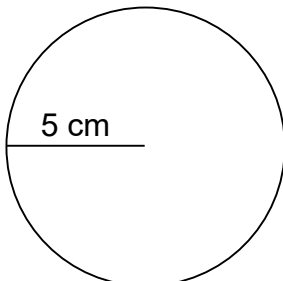
$$C=207.24 \text{ cm}$$

4.



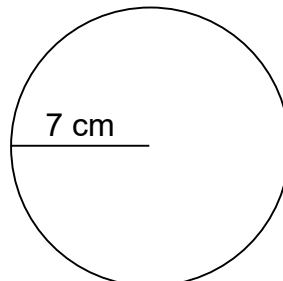
$$C=100.48 \text{ cm}$$

5.



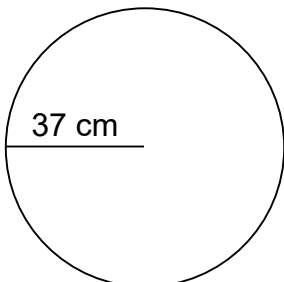
$$C=31.40 \text{ cm}$$

6.



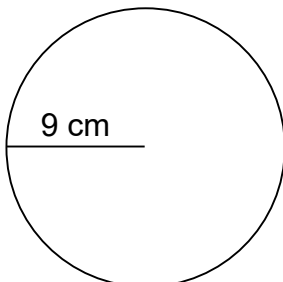
$$C=43.96 \text{ cm}$$

7.



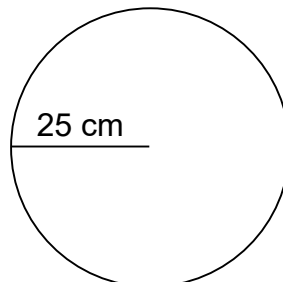
$$C=232.36 \text{ cm}$$

8.



$$C=56.52 \text{ cm}$$

9.



$$C=157.00 \text{ cm}$$