



Name: _____

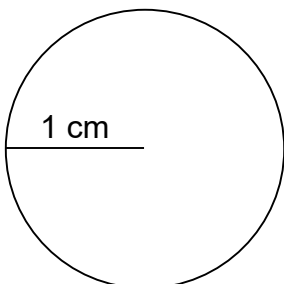
Circumference of Circles

Can you calculate the circumference of each circle given the radius?

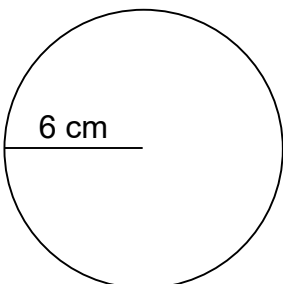
$$C = 2\pi \times r$$

Calculate the circumference of each circle.

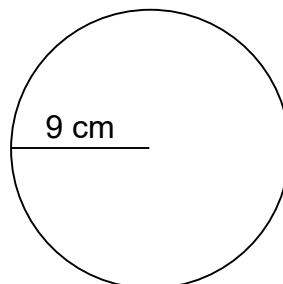
1.



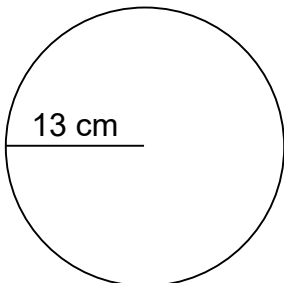
2.



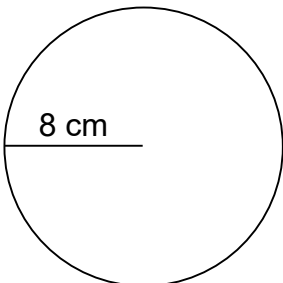
3.



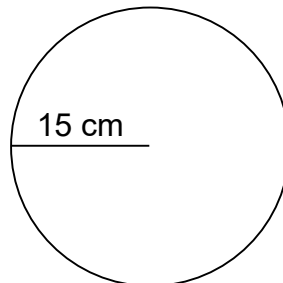
4.



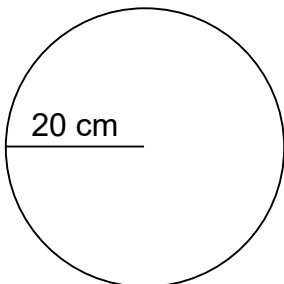
5.



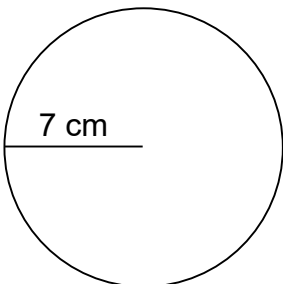
6.



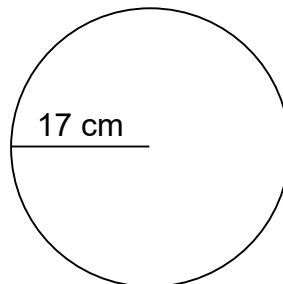
7.



8.



9.





Name: _____

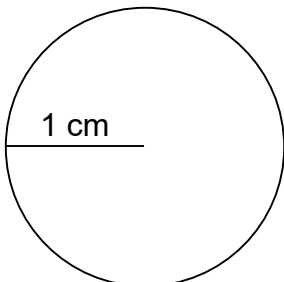
Circumference of Circles

Can you calculate the circumference of each circle given the radius?

$$C = 2\pi \times r$$

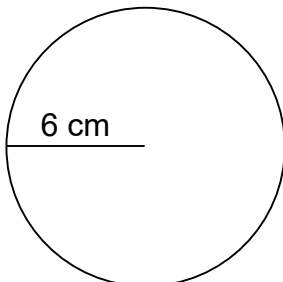
Calculate the circumference and area of each circle.

1.



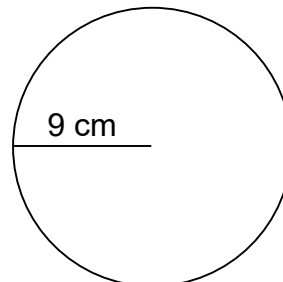
$$C=6.28 \text{ cm}$$

2.



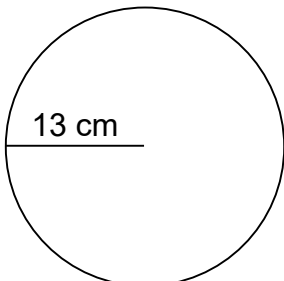
$$C=37.68 \text{ cm}$$

3.



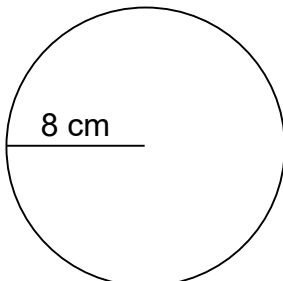
$$C=56.52 \text{ cm}$$

4.



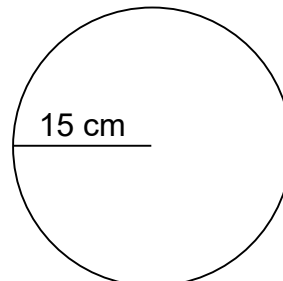
$$C=81.64 \text{ cm}$$

5.



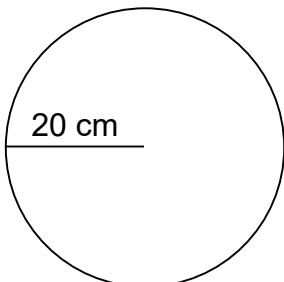
$$C=50.24 \text{ cm}$$

6.



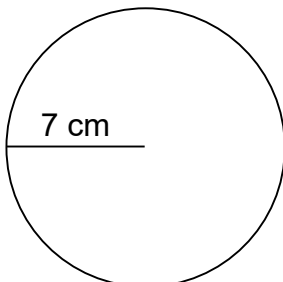
$$C=94.20 \text{ cm}$$

7.



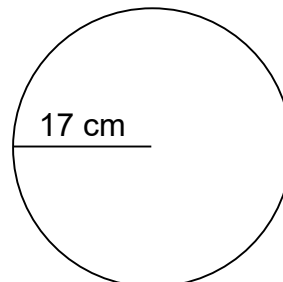
$$C=125.60 \text{ cm}$$

8.



$$C=43.96 \text{ cm}$$

9.



$$C=106.76 \text{ cm}$$