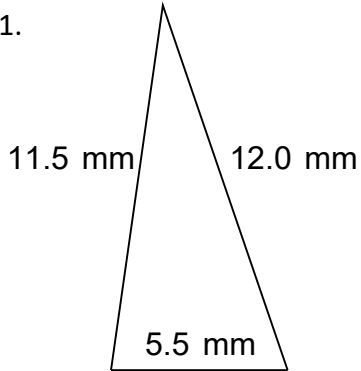


Name: _____

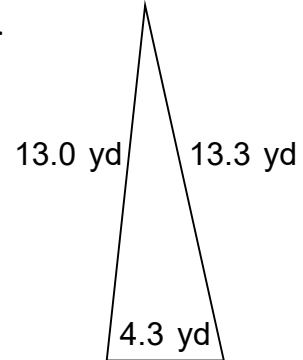
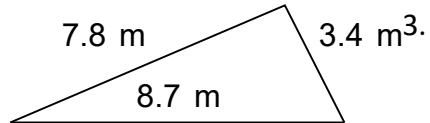
Find the Area of Triangles

Find the area of the triangles. Answer using the correct units.

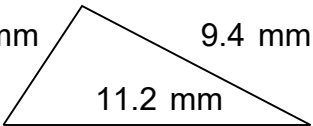
1.



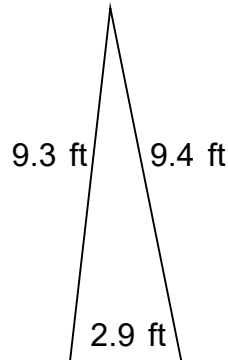
2.



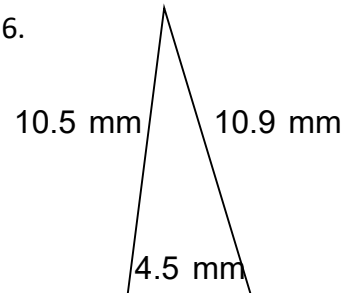
4.2 mm



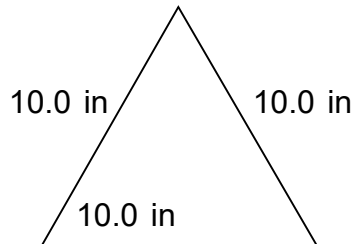
5.



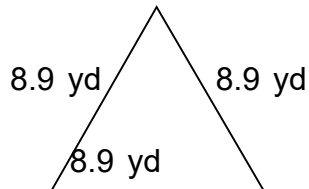
6.



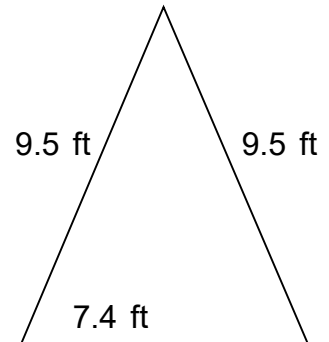
7.




8.



9.



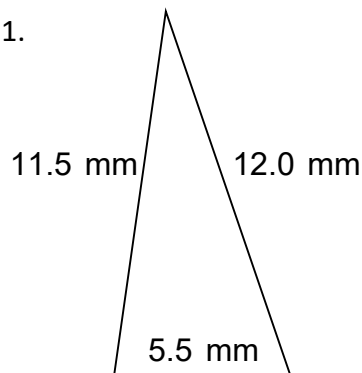


Name: _____

Find the Area of Triangles

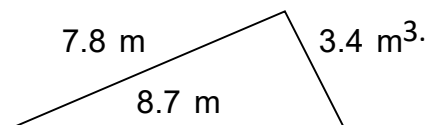
Find the area of the triangles. Answer using the correct units.

1.

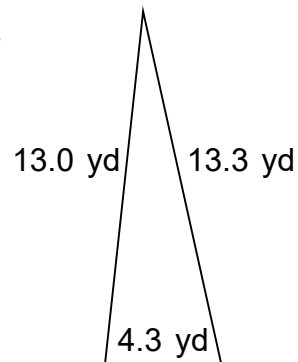


$P = 29.0 \text{ mm}$

2.

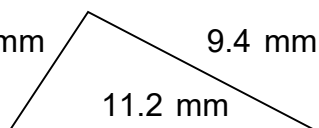


$P = 19.9 \text{ m}$



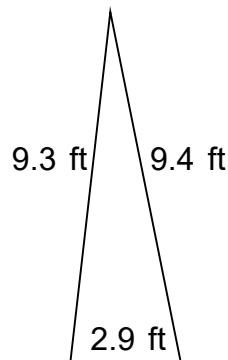
$P = 30.6 \text{ yd}$

3.



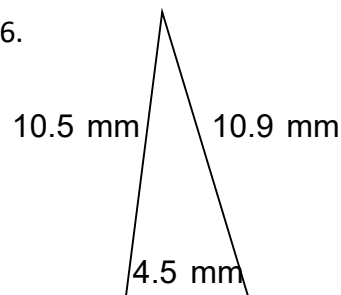
$P = 25.8 \text{ mm}$

5.



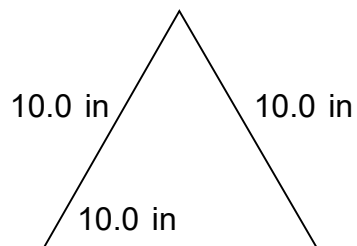
$P = 21.6 \text{ ft}$

6.



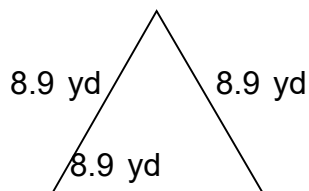
$P = 25.9 \text{ mm}$

7.



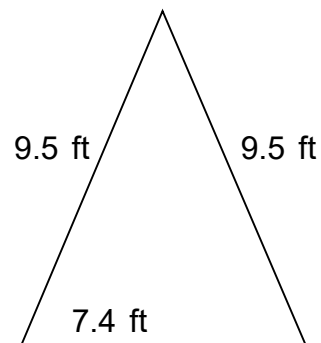
$P = 30.0 \text{ in}$

8.



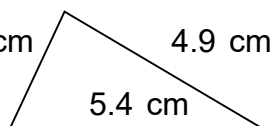
$P = 26.7 \text{ yd}$

9.



$P = 26.4 \text{ ft}$

10.



$P = 13.0 \text{ cm}$