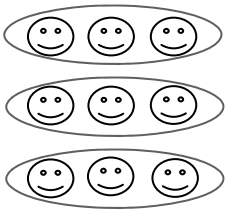


Division

Name _____

Circle the equal groups and write the division sentence.


Example:



$$9 \div 3 = 3$$

or


$$3 \overline{) 9}$$



$$\underline{\quad} \div \underline{\quad} =$$

or


$$\underline{\quad} \overline{\hspace{1cm}}$$



$$\underline{\quad} \div \underline{\quad} =$$

or


$$\underline{\quad} \overline{\hspace{1cm}}$$



$$\underline{\quad} \div \underline{\quad} =$$

or


$$\underline{\quad} \overline{\hspace{1cm}}$$



$$\underline{\quad} \div \underline{\quad} =$$

or


$$\underline{\quad} \overline{\hspace{1cm}}$$



$$\underline{\quad} \div \underline{\quad} =$$

or


$$\underline{\quad} \overline{\hspace{1cm}}$$



$$\underline{\quad} \div \underline{\quad} =$$

or

$$\underline{\quad} \overline{\hspace{1cm}}$$



$$\underline{\quad} \div \underline{\quad} =$$

or

$$\underline{\quad} \overline{\hspace{1cm}}$$